

# National Testing Agency

**Question Paper Name:** B PLANNING 6th JAN 2020 Shift 2 Set 2  
**Subject Name:** B PLANNING  
**Creation Date:** 2020-01-06 20:31:58  
**Duration:** 180  
**Total Marks:** 400  
**Display Marks:** Yes

## B PLANNING

**Group Number :** 1  
**Group Id :** 4050367  
**Group Maximum Duration :** 0  
**Group Minimum Duration :** 180  
**Show Attended Group? :** No  
**Edit Attended Group? :** No  
**Break time:** 0  
**Group Marks:** 400  
**Is this Group for Examiner?:** No

## Mathematics

**Section Id :** 40503620  
**Section Number :** 1  
**Section type :** Online  
**Mandatory or Optional:** Mandatory  
**Number of Questions:** 25  
**Number of Questions to be attempted:** 25  
**Section Marks:** 100

**Sub-Section Number:** 1  
**Sub-Section Id:** 40503628  
**Question Shuffling Allowed :** Yes

**Question Number : 1 Question Type : MCQ Option Shuffling : Yes**  
**Correct Marks : 4 Wrong Marks : 1**

If  $A = \{1, 2, 3, 4\}$ , then the number of functions on the set A, which are not one - one, is :

**Options :**

**1. 232**

2. 240

3. 248

4. 256

Question Number : 1 Question Type : MCQ Option Shuffling : Yes  
Correct Marks : 4 Wrong Marks : 1

यदि  $A = \{1, 2, 3, 4\}$  है, तो समुच्चय  $A$  पर ऐसे फलनों की संख्या जो एकैकी न हों, है :

Options :

1. 232

2. 240

3. 248

4. 256

Question Number : 1 Question Type : MCQ Option Shuffling : Yes  
Correct Marks : 4 Wrong Marks : 1

जे  $A = \{1, 2, 3, 4\}$  होय, तो अेक-अेक न होय तेवा गण  $A$  परनां विधेयोनी संख्या केटली थाय?

Options :

1. 232

2. 240

3. 248

4. 256

Question Number : 2 Question Type : MCQ Option Shuffling : Yes  
Correct Marks : 4 Wrong Marks : 1

The sum of the values of  $x$  satisfying the

$$\sqrt{x}(\sqrt{x}-4)-3|\sqrt{x}-2|+6=0$$

( $x \geq 0$ ), is :

Options :

1. 26

2. 25

3. 10

4. 8

Question Number : 2 Question Type : MCQ Option Shuffling : Yes  
Correct Marks : 4 Wrong Marks : 1

समीकरण  $\sqrt{x}(\sqrt{x}-4)-3|\sqrt{x}-2|+6=0$

( $x \geq 0$ ) को संतुष्ट करने वाले  $x$  के मानों का योगफल है :

Options :

1. 26

2. 25

3. 10

4. 8

Question Number : 2 Question Type : MCQ Option Shuffling : Yes  
Correct Marks : 4 Wrong Marks : 1

$$\text{સમીકરણ } \sqrt{x}(\sqrt{x}-4)-3|\sqrt{x}-2|+6=0 \quad (x \geq 0)$$

નું સમાધાન કરતી  $x$  ની કિંમતો નો સરવાળો \_\_\_\_\_  
થાય.

Options :

1. 26

2. 25

3. 10

4. 8

Question Number : 3 Question Type : MCQ Option Shuffling : Yes  
Correct Marks : 4 Wrong Marks : 1

If  $m$  be the least value of  
 $|z-3+i4|^2+|z-5-i2|^2$ ,  $z \in \mathbb{C}$  attained at  
 $z=z_0$ , then the ordered pair  $(|z_0|, m)$  is equal  
to :

Options :

1.  $(\sqrt{13}, 10)$

2.  $(\sqrt{17}, 20)$

3.  $(\sqrt{17}, 10)$

4.  $(\sqrt{13}, 20)$

Question Number : 3 Question Type : MCQ Option Shuffling : Yes  
Correct Marks : 4 Wrong Marks : 1

यदि  $z = z_0$  पर  $|z - 3 + i4|^2 + |z - 5 - i2|^2$ ,  $z \in \mathbb{C}$   
का प्राप्त हुआ न्यूनतम मान  $m$  है, तो क्रमित युग्म  
 $(|z_0|, m)$  बराबर है :

Options :

1.  $(\sqrt{13}, 10)$

2.  $(\sqrt{17}, 20)$

3.  $(\sqrt{17}, 10)$

4.  $(\sqrt{13}, 20)$

Question Number : 3 Question Type : MCQ Option Shuffling : Yes  
Correct Marks : 4 Wrong Marks : 1

जे  $z = z_0$  आगण  $|z - 3 + i4|^2 + |z - 5 - i2|^2$ ,  
 $z \in \mathbb{C}$  अे न्यूनतम किंमत  $m$  धारण करतुं लेय, तो क्रमयुक्त  
जेड  $(|z_0|, m) = \underline{\hspace{2cm}}$ .

Options :

1.  $(\sqrt{13}, 10)$

2.  $(\sqrt{17}, 20)$

3.  $(\sqrt{17}, 10)$

4.  $(\sqrt{13}, 20)$

Question Number : 4 Question Type : MCQ Option Shuffling : Yes  
Correct Marks : 4 Wrong Marks : 1

If for some  $c < 0$ , the quadratic equation,  
 $2cx^2 - 2(2c - 1)x + 3c^2 = 0$  has two distinct  
real roots,  $\frac{1}{a}$  and  $\frac{1}{b}$ , then the value of the

determinant,  $\begin{vmatrix} 1+a & 1 & 1 \\ 1 & 1+b & 1 \\ 1 & 1 & 1+c \end{vmatrix}$  is :

Options :

1. 2

2. 0

3.  $\frac{4}{3}$

4. 1

Question Number : 4 Question Type : MCQ Option Shuffling : Yes  
Correct Marks : 4 Wrong Marks : 1

यदि किसी  $c < 0$  के लिए द्विघात समीकरण  
 $2cx^2 - 2(2c - 1)x + 3c^2 = 0$  के दो भिन्न वास्तविक  
मूल  $\frac{1}{a}$  तथा  $\frac{1}{b}$  हैं, तो सारणिक

$\begin{vmatrix} 1+a & 1 & 1 \\ 1 & 1+b & 1 \\ 1 & 1 & 1+c \end{vmatrix}$  का मान है :

Options :

1. 2

2. 0

3.  $\frac{4}{3}$

4. 1

Question Number : 4 Question Type : MCQ Option Shuffling : Yes

Correct Marks : 4 Wrong Marks : 1

જો કોઈક  $c < 0$  માટે દ્વિઘાત સમીકરણ  
 $2cx^2 - 2(2c-1)x + 3c^2 = 0$  ને બે ભિન્ન ખીજો

$\frac{1}{a}$  અને  $\frac{1}{b}$  હોય, તો નિશ્ચાયક

$$\begin{vmatrix} 1+a & 1 & 1 \\ 1 & 1+b & 1 \\ 1 & 1 & 1+c \end{vmatrix} \text{ની કિંમત} =$$

Options :

1. 2

2. 0

3.  $\frac{4}{3}$

4. 1

Question Number : 5 Question Type : MCQ Option Shuffling : Yes

Correct Marks : 4 Wrong Marks : 1

Let  $A = \begin{bmatrix} x & 2y \\ -1 & y \end{bmatrix}; x, y \in \mathbf{R}$ .

If  $AA^T = \begin{bmatrix} 1 & 0 \\ 0 & \alpha \end{bmatrix} (\alpha \in \mathbf{R})$ , then  $\alpha + y^2$  is

equal to :

Options :

1. 1

2.  $\sqrt{2} - 1$

3. 2

4.  $\sqrt{2}$

Question Number : 5 Question Type : MCQ Option Shuffling : Yes

Correct Marks : 4 Wrong Marks : 1

माना  $A = \begin{bmatrix} x & 2y \\ -1 & y \end{bmatrix}; x, y \in \mathbf{R}$  हैं। यदि

$AA^T = \begin{bmatrix} 1 & 0 \\ 0 & \alpha \end{bmatrix} (\alpha \in \mathbf{R})$  है, तो  $\alpha + y^2$  का मान

है :

Options :

1. 1

2.  $\sqrt{2} - 1$

3. 2



4.  $\sqrt{2}$

Question Number : 5 Question Type : MCQ Option Shuffling : Yes

Correct Marks : 4 Wrong Marks : 1

ધારો કે  $A = \begin{bmatrix} x & 2y \\ -1 & y \end{bmatrix}; x, y \in \mathbf{R}$ . જો

$AA^T = \begin{bmatrix} 1 & 0 \\ 0 & \alpha \end{bmatrix} (\alpha \in \mathbf{R})$  હોય, તો

$\alpha + y^2 = \underline{\hspace{2cm}}$ .

Options :

1. 1

2.  $\sqrt{2} - 1$

3. 2

4.  $\sqrt{2}$

Question Number : 6 Question Type : MCQ Option Shuffling : Yes

Correct Marks : 4 Wrong Marks : 1

Let  $S_n$  denote the sum of the first  $n$  terms of an A.P.,  $a_1, a_2, a_3, \dots, a_n$ . If  $a_5 + a_9 = 1$  and  $S_9 = 6$ , then which one of the following is not true ?

Options :

1.  $S_{13} = \frac{13}{2}$

2.  $a_{13} = 0$

3.  $a_6 + a_8 = 1$

4.  $S_6 = \frac{19}{2}$

Question Number : 6 Question Type : MCQ Option Shuffling : Yes  
Correct Marks : 4 Wrong Marks : 1

माना  $S_n$ , समांतर श्रेणी  $a_1, a_2, a_3, \dots, a_n$  के प्रथम  $n$  पदों के योग को दर्शाता है। यदि  $a_5 + a_9 = 1$  तथा  $S_9 = 6$  हैं, तो निम्न में से कौन सा एक सत्य नहीं है?

Options :

1.  $S_{13} = \frac{13}{2}$

2.  $a_{13} = 0$

3.  $a_6 + a_8 = 1$

4.  $S_6 = \frac{19}{2}$

Question Number : 6 Question Type : MCQ Option Shuffling : Yes  
Correct Marks : 4 Wrong Marks : 1

धारोके  $S_n$  એ સમાંતર શ્રેણી (A.P.)  $a_1, a_2, a_3, \dots, a_n$  નાં પહેલા  $n$  પદોનો સરવાળો દર્શાવે છે. જો  $a_5 + a_9 = 1$  અને  $S_9 = 6$  હોય, તો નીચેનામાંથી કયું સાચું નથી?

Options :

1.  $S_{13} = \frac{13}{2}$

2.  $a_{13} = 0$

3.  $a_6 + a_8 = 1$

4.  $S_6 = \frac{19}{2}$

Question Number : 7 Question Type : MCQ Option Shuffling : Yes  
Correct Marks : 4 Wrong Marks : 1

If  $\sum_{r=1}^9 \left( \frac{r+3}{2^r} \right) {}^9C_r = \alpha \left( \frac{3}{2} \right)^9 + \beta$ , then

$\alpha + \beta$  is equal to :

Options :

1. 2

2. 9

3. 3

4. 6

Question Number : 7 Question Type : MCQ Option Shuffling : Yes  
Correct Marks : 4 Wrong Marks : 1

यदि  $\sum_{r=1}^9 \left( \frac{r+3}{2^r} \right) {}^9C_r = \alpha \left( \frac{3}{2} \right)^9 + \beta$  है, तो

$\alpha + \beta$  का मान है :

Options :

1. 2

2. 9

3. 3

4. 6

Question Number : 7 Question Type : MCQ Option Shuffling : Yes

Correct Marks : 4 Wrong Marks : 1

$$\sum_{r=1}^9 \left( \frac{r+3}{2^r} \right) {}^9C_r = \alpha \left( \frac{3}{2} \right)^9 + \beta \text{ है, तब}$$

$$\alpha + \beta = \underline{\hspace{2cm}}$$

Options :

1. 2

2. 9

3. 3

4. 6

Question Number : 8 Question Type : MCQ Option Shuffling : Yes

Correct Marks : 4 Wrong Marks : 1

Let a function,  $f: (-1, 3) \rightarrow \mathbf{R}$  be defined as  $f(x) = \min\{x[x], |x[x] - 2| + 2\}$ , where  $[x]$  denotes the greatest integer  $\leq x$ . Then  $f$  is :

Options :

neither continuous nor differentiable

1. at exactly 3 points.

not continuous at two points and not  
2. differentiable at 3 points.

neither continuous nor differentiable  
3. at exactly two points.

not continuous at only one point and  
4. not differentiable at three points.

Question Number : 8 Question Type : MCQ Option Shuffling : Yes  
Correct Marks : 4 Wrong Marks : 1

माना एक फलन  $f: (-1, 3) \rightarrow \mathbf{R}$ ,

$f(x) = \min\{x[x], |x[x] - 2| + 2\}$  द्वारा परिभाषित है,  
जहाँ  $[x]$ , महत्तम पूर्णांक  $\leq x$  को दर्शाता है, तो  $f$  :

Options :

मात्र तीन बिंदुओं पर न तो संतत है और न ही  
1. अवकलनीय है।

दो बिंदुओं पर संतत नहीं है तथा तीन बिंदुओं  
2. पर अवकलनीय नहीं है।

मात्र दो बिंदुओं पर न तो संतत है और न ही  
3. अवकलनीय है।

केवल एक बिंदु पर संतत नहीं है तथा तीन  
4. बिंदुओं पर अवकलनीय नहीं है।

Question Number : 8 Question Type : MCQ Option Shuffling : Yes  
Correct Marks : 4 Wrong Marks : 1

ધારોકે વિધેય  $f: (-1, 3) \rightarrow \mathbb{R}$  એ

$f(x) = \min\{x[x], |x[x] - 2| + 2\}$  દ્વારા વ્યાખ્યાયિત હોય, જ્યાં  $[x]$  એ મોટામાં મોટો પૂર્ણાંક  $\leq x$  દર્શાવે, તો  $f$  એ :

Options :

બરાબર 3 બિંદુઓ આગળ સતત પણ નથી કે

1. વિકલનીય પણ નથી.

બે બિંદુઓ આગળ સતત નથી અને 3 બિંદુઓ

2. આગળ વિકલનીય નથી.

બરાબર બે બિંદુઓ આગળ સતત પણ નથી કે

3. વિકલનીય પણ નથી.

ફક્ત એક બિંદુ આગળ સતત નથી અને ત્રણ

4. બિંદુઓ આગળ વિકલનીય નથી.

Question Number : 9 Question Type : MCQ Option Shuffling : Yes

Correct Marks : 4 Wrong Marks : 1

$$\lim_{x \rightarrow 1} \left\{ \log_e \left( e^{x(x-1)} - e^{x(1-x)} \right) - \right.$$

$\log_e (4x(x-1)) \left. \right\}$  is equal to :

Options :

1. 1

2.  $-\log_e 2$

3.  $-2\log_e 2$

4.  $1 - \log_e 2$

Question Number : 9 Question Type : MCQ Option Shuffling : Yes

Correct Marks : 4 Wrong Marks : 1

$\lim_{x \rightarrow 1} \left\{ \log_e \left( e^{x(x-1)} - e^{x(1-x)} \right) - \log_e (4x(x-1)) \right\}$  बराबर है :

Options :

1. 1

2.  $-\log_e 2$

3.  $-2\log_e 2$

4.  $1 - \log_e 2$

Question Number : 9 Question Type : MCQ Option Shuffling : Yes

Correct Marks : 4 Wrong Marks : 1

$\lim_{x \rightarrow 1} \left\{ \log_e \left( e^{x(x-1)} - e^{x(1-x)} \right) - \log_e (4x(x-1)) \right\} = \text{_____}$ .

Options :

1. 1

2.  $-\log_e 2$

3.  $-2\log_e 2$

4.  $1 - \log_e 2$

Question Number : 10 Question Type : MCQ Option Shuffling : Yes  
Correct Marks : 4 Wrong Marks : 1

The function  $f(x) = e^{x+1} (4x^2 - 16x + 11)$

is :

Options :

1. increasing in  $\left(-\infty, -\frac{1}{2}\right) \cup \left(\frac{5}{2}, \infty\right)$

2. increasing in  $(-\infty, -2) \cup (2, \infty)$

3. decreasing in  $\left(-\infty, -\frac{5}{2}\right) \cup \left(\frac{1}{2}, \infty\right)$

4. decreasing in  $\left(-\infty, \frac{1}{2}\right) \cup \left(\frac{5}{2}, \infty\right)$

Question Number : 10 Question Type : MCQ Option Shuffling : Yes  
Correct Marks : 4 Wrong Marks : 1

फलन  $f(x) = e^{x+1} (4x^2 - 16x + 11)$  :

Options :

1.  $\left(-\infty, -\frac{1}{2}\right) \cup \left(\frac{5}{2}, \infty\right)$  में वर्धमान है।

2.  $(-\infty, -2) \cup (2, \infty)$  में वर्धमान है।

3.  $\left(-\infty, -\frac{5}{2}\right) \cup \left(\frac{1}{2}, \infty\right)$  में ह्रासमान है।



4.  $\left(-\infty, \frac{1}{2}\right) \cup \left(\frac{5}{2}, \infty\right)$  में ह्रासमान है।

Question Number : 10 Question Type : MCQ Option Shuffling : Yes

Correct Marks : 4 Wrong Marks : 1

વિધેય  $f(x) = e^{x+1} (4x^2 - 16x + 11)$  એ :

Options :

1.  $\left(-\infty, -\frac{1}{2}\right) \cup \left(\frac{5}{2}, \infty\right)$  માં વધે છે.

2.  $(-\infty, -2) \cup (2, \infty)$  માં વધે છે.

3.  $\left(-\infty, -\frac{5}{2}\right) \cup \left(\frac{1}{2}, \infty\right)$  માં ઘટે છે.

4.  $\left(-\infty, \frac{1}{2}\right) \cup \left(\frac{5}{2}, \infty\right)$  માં ઘટે છે.

Question Number : 11 Question Type : MCQ Option Shuffling : Yes

Correct Marks : 4 Wrong Marks : 1

The area (in sq. units) of the region

$\left\{(x, y) : \frac{1}{2} \leq y \leq \sin x, 0 \leq x \leq \pi\right\}$  is :

Options :

1.  $\sqrt{3} - \frac{\pi}{3}$

2.  $3 - \frac{\pi}{3}$

3.  $3 - \frac{2\pi}{3}$

4.  $\sqrt{3} - \frac{\pi}{6}$

Question Number : 11 Question Type : MCQ Option Shuffling : Yes  
Correct Marks : 4 Wrong Marks : 1

ક્ષેત્ર  $\left\{ (x, y) : \frac{1}{2} \leq y \leq \sin x, 0 \leq x \leq \pi \right\}$

કા ક્ષેત્રફલ (વર્ગ ઇકાઇયોં મેં) હૈ :

Options :

1.  $\sqrt{3} - \frac{\pi}{3}$

2.  $3 - \frac{\pi}{3}$

3.  $3 - \frac{2\pi}{3}$

4.  $\sqrt{3} - \frac{\pi}{6}$

Question Number : 11 Question Type : MCQ Option Shuffling : Yes  
Correct Marks : 4 Wrong Marks : 1

પ્રદેશ  $\left\{ (x, y) : \frac{1}{2} \leq y \leq \sin x, 0 \leq x \leq \pi \right\}$

નું ક્ષેત્રફલ (ચો. એકમમાં) \_\_\_\_\_ છે.

Options :

1.  $\sqrt{3} - \frac{\pi}{3}$

2.  $3 - \frac{\pi}{3}$

3.  $3 - \frac{2\pi}{3}$

4.  $\sqrt{3} - \frac{\pi}{6}$

Question Number : 12 Question Type : MCQ Option Shuffling : Yes  
Correct Marks : 4 Wrong Marks : 1

If  $x = x(y)$  is the solution of the differential equation,  $ydx - (x + 2y^2)dy = 0$ , with  $x(-\pi) = \pi^2$ , then  $x$  is equal to :

Options :

1.  $2y^2 - \pi^2$

2.  $-2y^2 + 3\pi y$

3.  $-y^2 - 2\pi y$

4.  $2y^2 + \pi y$

Question Number : 12 Question Type : MCQ Option Shuffling : Yes  
Correct Marks : 4 Wrong Marks : 1

यदि  $x = x(y)$ , अवकल समीकरण  $ydx - (x + 2y^2)dy = 0$ ,  $x(-\pi) = \pi^2$ , का हल है, तो  $x$  बराबर है :

Options :

1.  $2y^2 - \pi^2$

2.  $-2y^2 + 3\pi y$

3.  $-y^2 - 2\pi y$

4.  $2y^2 + \pi y$

Question Number : 12 Question Type : MCQ Option Shuffling : Yes  
Correct Marks : 4 Wrong Marks : 1

જો  $x = x(y)$  એ વિકલ સમીકરણ  
 $y dx - (x + 2y^2) dy = 0$  નો ઉકેલ હોય, જ્યાં  
 $x(-\pi) = \pi^2$ , તો  $x =$  \_\_\_\_\_.

Options :

1.  $2y^2 - \pi^2$

2.  $-2y^2 + 3\pi y$

3.  $-y^2 - 2\pi y$

4.  $2y^2 + \pi y$

Question Number : 13 Question Type : MCQ Option Shuffling : Yes  
Correct Marks : 4 Wrong Marks : 1

A ray of light is projected from the origin at angle of  $60^\circ$  with the positive direction of  $x$ -axis towards the line,  $y = 2$ , which gets reflected from the point  $(\alpha, 2)$ . Then the distance of the reflected ray of light from the point  $(2, 2)$  is :

Options :

1.  $\sqrt{3} - 1$

2.  $2\left(1 - \frac{1}{\sqrt{3}}\right)$

3.  $3 - \sqrt{3}$

4.  $1 - \frac{1}{\sqrt{3}}$

Question Number : 13 Question Type : MCQ Option Shuffling : Yes  
Correct Marks : 4 Wrong Marks : 1

प्रकाश की एक किरण, मूल बिंदु से  $x$ -अक्ष की धनात्मक दिशा से  $60^\circ$  के कोण पर रेखा  $y=2$  की ओर प्रक्षेपित की जाती है, जो कि बिंदु  $(\alpha, 2)$  से परावर्तित हो जाती है। तो बिंदु  $(2, 2)$  से परावर्तित प्रकाश की किरण की दूरी बराबर है :

Options :

1.  $\sqrt{3} - 1$

2.  $2\left(1 - \frac{1}{\sqrt{3}}\right)$

3.  $3 - \sqrt{3}$

4.  $1 - \frac{1}{\sqrt{3}}$

Question Number : 13 Question Type : MCQ Option Shuffling : Yes  
Correct Marks : 4 Wrong Marks : 1

પ્રકાશનું કિરણ  $x$ -અક્ષની ધનદિશા સાથે  $60^\circ$  નો ખૂણો બનાવે તે રીતે ઉગમબિંદુ પરથી રેખા  $y = 2$  તરફ પ્રક્ષેપ કરવામાં આવે છે, જે બિંદુ  $(\alpha, 2)$  પરથી પરાવર્તિત થાય છે. તો પ્રકાશનાં આ પરાવર્તિત કિરણનું બિંદુ  $(2, 2)$  થી અંતર \_\_\_\_\_ થાય.

Options :

1.  $\sqrt{3} - 1$

2.  $2\left(1 - \frac{1}{\sqrt{3}}\right)$

3.  $3 - \sqrt{3}$

4.  $1 - \frac{1}{\sqrt{3}}$

Question Number : 14 Question Type : MCQ Option Shuffling : Yes

Correct Marks : 4 Wrong Marks : 1

Let the ellipse,  $\frac{x^2}{a^2} + \frac{y^2}{b^2} = 1$ ,  $a > b$ , pass

through the point  $(2, 3)$  and have

eccentricity equal to  $\frac{1}{2}$ . Then equation of

the normal to this ellipse at  $(2, 3)$  is :

Options :

1.  $2y - x = 4$

2.  $2x - y = 1$

3.  $3x - y = 3$

4.  $3x - 2y = 0$

Question Number : 14 Question Type : MCQ Option Shuffling : Yes

Correct Marks : 4 Wrong Marks : 1

માના ઢીર્ઘવૃત્ત  $\frac{x^2}{a^2} + \frac{y^2}{b^2} = 1$ ,  $a > b$ , બિંદુ (2, 3)

સે હો કર જાતા હૈ તથા ઇસકી ઉત્કેન્દ્રતા  $\frac{1}{2}$  હૈ, તો (2, 3)

પર ઢીર્ઘવૃત્ત કે અભિલંબ કા સમીકરણ હૈ :

Options :

1.  $2y - x = 4$

2.  $2x - y = 1$

3.  $3x - y = 3$

4.  $3x - 2y = 0$

Question Number : 14 Question Type : MCQ Option Shuffling : Yes

Correct Marks : 4 Wrong Marks : 1

ધારોકે ઉપવલય  $\frac{x^2}{a^2} + \frac{y^2}{b^2} = 1$ ,  $a > b$  એ બિંદુ

(2, 3) માંથી પસાર થાય છે અને તેની ઉત્કેન્દ્રતા  $\frac{1}{2}$  છે.

તો (2, 3) આગળ આ ઉપવલયના અભિલંબનું સમીકરણ \_\_\_\_\_ છે.

Options :

1.  $2y - x = 4$

2.  $2x - y = 1$

3.  $3x - y = 3$

4.  $3x - 2y = 0$

Question Number : 15 Question Type : MCQ Option Shuffling : Yes  
Correct Marks : 4 Wrong Marks : 1

If a variable plane in 3-dimensional space moves in such a way that the sum of the reciprocals of its intercepts on the  $x$  and  $y$ -axes exceeds the reciprocal of its intercept on the  $z$ -axis by 2, then all such planes will pass through the point :

Options :

1.  $\left(\frac{1}{2}, \frac{1}{2}, \frac{1}{2}\right)$

2.  $\left(\frac{1}{2}, \frac{1}{2}, -\frac{1}{2}\right)$

3.  $\left(\frac{1}{2}, -\frac{1}{2}, \frac{1}{2}\right)$

4.  $\left(\frac{1}{2}, -\frac{1}{2}, -\frac{1}{2}\right)$

Question Number : 15 Question Type : MCQ Option Shuffling : Yes  
Correct Marks : 4 Wrong Marks : 1



यदि एक चर समतल त्रिविमीय (3-dimensional) आकाश में इस प्रकार चलता है कि इसके  $x$  तथा  $y$ - अक्षों पर बने अन्तःखंडों के व्युत्क्रमों का योगफल इसके  $z$ -अक्ष पर बने अन्तःखंड के व्युत्क्रम से 2 अधिक है, तो ऐसे सभी समतल जिस बिंदु से होकर जाएँगे, वह है :

Options :

1.  $\left(\frac{1}{2}, \frac{1}{2}, \frac{1}{2}\right)$

2.  $\left(\frac{1}{2}, \frac{1}{2}, -\frac{1}{2}\right)$

3.  $\left(\frac{1}{2}, -\frac{1}{2}, \frac{1}{2}\right)$

4.  $\left(\frac{1}{2}, -\frac{1}{2}, -\frac{1}{2}\right)$

Question Number : 15 Question Type : MCQ Option Shuffling : Yes

Correct Marks : 4 Wrong Marks : 1

જો ત્રિપરિમાણીય અવકાશમાં એક ચલિત સમતલ એ રીતે ખસે છે કે જેથી  $x$  અને  $y$ -અક્ષો પરનાં તેના અંતઃખંડોના વ્યસ્તનો સરવાળો એ  $z$ -અક્ષ પરનાં તેના અંતઃખંડનાં વ્યસ્ત કરતા 2 જેટલો વધુ હોય, તો આવા દરેક સમતલો \_\_\_\_\_ બિંદુમાંથી પસાર થશે.

Options :

1.  $\left(\frac{1}{2}, \frac{1}{2}, \frac{1}{2}\right)$

2.  $\left(\frac{1}{2}, \frac{1}{2}, -\frac{1}{2}\right)$

3.  $\left(\frac{1}{2}, -\frac{1}{2}, \frac{1}{2}\right)$

4.  $\left(\frac{1}{2}, -\frac{1}{2}, -\frac{1}{2}\right)$

Question Number : 16 Question Type : MCQ Option Shuffling : Yes  
Correct Marks : 4 Wrong Marks : 1

If the volume of a parallelopiped whose

coterminous edges are  $\vec{a} = \hat{i} + \hat{j} + 2\hat{k}$ ,

$\vec{b} = 2\hat{i} + \lambda\hat{j} + \hat{k}$  and  $\vec{c} = 2\hat{i} + 2\hat{j} + \lambda\hat{k}$

is 35 cu.m, then a value of

$\vec{a} \cdot \vec{b} + \vec{b} \cdot \vec{c} - \vec{c} \cdot \vec{a}$  is:

Options :

1. 2

2. -14

3. -10

4. 22

Question Number : 16 Question Type : MCQ Option Shuffling : Yes  
Correct Marks : 4 Wrong Marks : 1

यदि एक समांतर षट्फलक जिसके सहावसानी

(coterminous) किनारे  $\vec{a} = \hat{i} + \hat{j} + 2\hat{k}$ ,

$\vec{b} = 2\hat{i} + \lambda\hat{j} + \hat{k}$  तथा  $\vec{c} = 2\hat{i} + 2\hat{j} + \lambda\hat{k}$

हैं, का आयतन 35 cu.m है, तो

$\vec{a} \cdot \vec{b} + \vec{b} \cdot \vec{c} - \vec{c} \cdot \vec{a}$  का एक मान है :

Options :

1. 2

2. -14

3. -10

4. 22

Question Number : 16 Question Type : MCQ Option Shuffling : Yes

Correct Marks : 4 Wrong Marks : 1

જેની એકબીજાને સંલગ્ન બાજુઓ  $\vec{a} = \hat{i} + \hat{j} + 2\hat{k}$ ,

$\vec{b} = 2\hat{i} + \lambda\hat{j} + \hat{k}$  અને  $\vec{c} = 2\hat{i} + 2\hat{j} + \lambda\hat{k}$

હોય તેવા સમાંતર ફલકનું ઘનફળ 35 ઘન મી. હોય, તો

$\vec{a} \cdot \vec{b} + \vec{b} \cdot \vec{c} - \vec{c} \cdot \vec{a}$  ની કિંમત \_\_\_\_\_

થાય.

Options :

1. 2

2. -14

3. -10

4. 22

Question Number : 17 Question Type : MCQ Option Shuffling : Yes

Correct Marks : 4 Wrong Marks : 1

If  $10 \sin^4\alpha + 15 \cos^4\alpha = 6$ ,  $\alpha \in \left(-\frac{\pi}{2}, \frac{\pi}{2}\right)$ ,

then  $27 \operatorname{cosec}^6\alpha + 8 \sec^6\alpha$  is equal to :

Options :

1. 280

2. 270

3. 250

4. 240

Question Number : 17 Question Type : MCQ Option Shuffling : Yes

Correct Marks : 4 Wrong Marks : 1

यदि  $10 \sin^4\alpha + 15 \cos^4\alpha = 6$ ,  $\alpha \in \left(-\frac{\pi}{2}, \frac{\pi}{2}\right)$

है, तो  $27 \operatorname{cosec}^6\alpha + 8 \sec^6\alpha$  बराबर है :

Options :

1. 280

2. 270

3. 250

4. 240

Question Number : 17 Question Type : MCQ Option Shuffling : Yes

Correct Marks : 4 Wrong Marks : 1

यदि  $10 \sin^4\alpha + 15 \cos^4\alpha = 6$ ,  $\alpha \in \left(-\frac{\pi}{2}, \frac{\pi}{2}\right)$

है, तो  $27 \operatorname{cosec}^6\alpha + 8 \sec^6\alpha =$  \_\_\_\_\_.

Options :

1. 280

2. 270

3. 250

4. 240

Question Number : 18 Question Type : MCQ Option Shuffling : Yes

Correct Marks : 4 Wrong Marks : 1

A bag contains 6 red balls and 10 green balls. 3 balls are drawn from it one by one randomly without replacement. If the 3<sup>rd</sup> drawn ball is red, then the probability that the first two drawn balls are green is :

Options :

1.  $\frac{3}{7}$

2.  $\frac{3}{8}$

3.  $\frac{9}{56}$

4.  $\frac{9}{49}$

Question Number : 18 Question Type : MCQ Option Shuffling : Yes

Correct Marks : 4 Wrong Marks : 1

एक थैले में 6 लाल तथा 10 हरी गेंदें हैं। इसमें से एक एक करके यादृच्छया 3 गेंदे, बिना प्रतिस्थापना के, निकाली जाती हैं। यदि निकाली गई तीसरी गेंद लाल है, तो निकाली गई पहली दो गेंदों के हरी होने की प्रायिकता है :

Options :

1.  $3/7$

2.  $3/8$

3.  $9/56$

4.  $9/49$

Question Number : 18 Question Type : MCQ Option Shuffling : Yes

Correct Marks : 4 Wrong Marks : 1

એક થેલામાં 6 લાલ દડા અને 10 લીલા દડા છે. તેમાંથી 3 દડા યાદચ્છિક રીતે એક પછી એક પુરવાણીરહિત લેવામાં આવે છે. જો લેવામાં આવેલ ત્રીજો દડો લાલ હોય, તો પહેલા લેવામાં આવેલ બે દડા લીલા હોય તેની સંભાવના \_\_\_\_\_ થાય.

Options :

1.  $3/7$

2.  $3/8$

3.  $9/56$

4. 9/49

Question Number : 19 Question Type : MCQ Option Shuffling : Yes

Correct Marks : 4 Wrong Marks : 1

Let the data  $4, 10, x, y, 27$  be in the increasing order. If the median of the data is 18 and its mean deviation about mean is 7.6, then the mean of this data is :

Options :

1. 15.5

2. 16

3. 16.5

4. 17

Question Number : 19 Question Type : MCQ Option Shuffling : Yes

Correct Marks : 4 Wrong Marks : 1

माना आँकड़े  $4, 10, x, y, 27$  बढ़ते क्रम में हैं। यदि आँकड़ों का माध्यक 18 है तथा इनका माध्य के सापेक्ष माध्य विचलन 7.6 है, तो इन आँकड़ों का माध्य है :

Options :

1. 15.5

2. 16

3. 16.5

4. 17

Question Number : 19 Question Type : MCQ Option Shuffling : Yes

Correct Marks : 4 Wrong Marks : 1

ધારોકે માહિતી 4, 10,  $x$ ,  $y$ , 27 એ વધતા ક્રમમાં છે. જો માહિતીનો મધ્યસ્થ 18 હોય અને તેનું મધ્યકની સાપેક્ષ સરેરાશ વિચલન 7.6 હોય, તો આ માહિતીનો મધ્યક \_\_\_\_\_ છે.

Options :

1. 15.5

2. 16

3. 16.5

4. 17

Question Number : 20 Question Type : MCQ Option Shuffling : Yes

Correct Marks : 4 Wrong Marks : 1

Which of the following is not equivalent to

$\sim p \wedge q$  ?

Options :

1.  $\sim(p \vee \sim q)$

2.  $\sim p \rightarrow \sim q$

3.  $\sim(q \rightarrow p)$



4.  $\sim p \wedge (\sim p \rightarrow q)$

Question Number : 20 Question Type : MCQ Option Shuffling : Yes  
Correct Marks : 4 Wrong Marks : 1

निम्न में से कौन सा  $\sim p \wedge q$  के तुल्य नहीं है?

Options :

1.  $\sim(p \vee \sim q)$

2.  $\sim p \rightarrow \sim q$

3.  $\sim(q \rightarrow p)$

4.  $\sim p \wedge (\sim p \rightarrow q)$

Question Number : 20 Question Type : MCQ Option Shuffling : Yes  
Correct Marks : 4 Wrong Marks : 1

नीचेनामोंथी क्युं  $\sim p \wedge q$  ने सभकक्ष नथी?

Options :

1.  $\sim(p \vee \sim q)$

2.  $\sim p \rightarrow \sim q$

3.  $\sim(q \rightarrow p)$

4.  $\sim p \wedge (\sim p \rightarrow q)$

Sub-Section Number:

2

Sub-Section Id:

40503629

Question Shuffling Allowed :

Yes

Question Number : 21 Question Type : SA

Correct Marks : 4 Wrong Marks : 0

If the total number of ways in which 8-digit numbers can be formed by using all the digits 0, 1, 2, 3, 4, 5, 7, 9 such that no two even digits appear together is  $(5!)^k$ , then k is equal to \_\_\_\_\_.

Response Type: Numeric

Evaluation Required For SA: Yes

Show Word Count: Yes

Answers Type: Range

Possible Answers :

100 to 100

Question Number : 21 Question Type : SA

Correct Marks : 4 Wrong Marks : 0

यदि सभी अंकों 0, 1, 2, 3, 4, 5, 7, 9 के प्रयोग से, 8-अंकों वाली ऐसी संख्याएँ, जिनमें कोई भी दो समअंक एक साथ न आएँ, बनाए जा सकने के कुल तरीकों की संख्या  $(5!)^k$  है, तो k का मान है \_\_\_\_\_।

Response Type: Numeric

Evaluation Required For SA: Yes

Show Word Count: Yes

Answers Type: Range

Possible Answers :

100 to 100

Question Number : 21 Question Type : SA

Correct Marks : 4 Wrong Marks : 0

जे अधाज अंको 0, 1, 2, 3, 4, 5, 7, 9 नो उपयोग करी ने, कोठपाण वे युग्म अंको अेक साथे न आवे ते रीते 8-अंकोनी संख्या अनाववानी रीतो  $(5!)^k$  होय, तो  $k =$  \_\_\_\_\_.

Response Type: Numeric

Evaluation Required For SA: Yes

Show Word Count: Yes

Answers Type: Range

Possible Answers :

100 to 100

Question Number : 22 Question Type : SA

Correct Marks : 4 Wrong Marks : 0

Let  $f(x) = \begin{cases} |x - 3|, & \text{if } x < -1 \\ 3x + 4, & \text{if } x \geq -1 \end{cases}$

$g(x) = x^2 - bx - 2$  ( $x \in \mathbb{R}$ ) and  $b$  is a real constant. If  $g \circ f$  is continuous at  $x = -1$ , then  $b$  is equal to \_\_\_\_\_.

**Response Type:** Numeric

**Evaluation Required For SA:** Yes

**Show Word Count:** Yes

**Answers Type:** Range

**Possible Answers :**

5 to 5

**Question Number : 22 Question Type : SA**

**Correct Marks : 4 Wrong Marks : 0**

माना  $f(x) = \begin{cases} |x - 3|, & \text{यदि } x < -1 \\ 3x + 4, & \text{यदि } x \geq -1 \end{cases}$

$g(x) = x^2 - bx - 2$ , ( $x \in \mathbb{R}$ ) तथा  $b$  एक वास्तविक अचर है। यदि  $g \circ f$ ,  $x = -1$  पर संतत है, तो  $b$  बराबर है \_\_\_\_\_।

**Response Type:** Numeric

**Evaluation Required For SA:** Yes

**Show Word Count:** Yes

**Answers Type:** Range

**Possible Answers :**

5 to 5

**Question Number : 22 Question Type : SA**

**Correct Marks : 4 Wrong Marks : 0**

ધારોકે  $f(x) = \begin{cases} |x - 3|, & \text{જો } x < -1 \\ 3x + 4, & \text{જો } x \geq -1 \end{cases}$

$g(x) = x^2 - bx - 2$ , ( $x \in \mathbb{R}$ ) અને  $b$  એ વાસ્તવિક અચળાંક છે. જો  $g \circ f$  એ  $x = -1$  આગળ સતત હોય તો  $b =$  \_\_\_\_\_ થાય.

**Response Type:** Numeric

**Evaluation Required For SA:** Yes

**Show Word Count:** Yes

**Answers Type:** Range

**Possible Answers :**

5 to 5

**Question Number : 23 Question Type : SA**

**Correct Marks : 4 Wrong Marks : 0**

If  $\int e^{2x} (\cos x + 7 \sin x) dx = e^{2x} g(x) + c$ , where  $c$  is a constant of integration, then

$g(0) + g\left(\frac{\pi}{2}\right)$  is equal to \_\_\_\_\_.

**Response Type:** Numeric

**Evaluation Required For SA:** Yes

**Show Word Count:** Yes

**Answers Type:** Range

**Possible Answers :**

2 to 2

**Question Number :** 23 **Question Type :** SA

**Correct Marks :** 4 **Wrong Marks :** 0

यदि

$$\int e^{2x} (\cos x + 7 \sin x) dx = e^{2x} g(x) + c \text{ है,}$$

जहाँ  $c$  एक समाकलन अचर है, तो  $g(0) + g\left(\frac{\pi}{2}\right)$

बराबर है \_\_\_\_\_ ।

**Response Type:** Numeric

**Evaluation Required For SA:** Yes

**Show Word Count:** Yes

**Answers Type:** Range

**Possible Answers :**

2 to 2

**Question Number :** 23 **Question Type :** SA

**Correct Marks :** 4 **Wrong Marks :** 0

જો

$$\int e^{2x} (\cos x + 7 \sin x) dx = e^{2x} g(x) + c,$$

જ્યાં  $c$  એ સંકલનનો અચળાંક હોય તો  $g(0) + g\left(\frac{\pi}{2}\right) =$

\_\_\_\_\_ થાય.

**Response Type:** Numeric

**Evaluation Required For SA:** Yes

**Show Word Count:** Yes

**Answers Type:** Range

**Possible Answers :**

2 to 2

**Question Number :** 24 **Question Type :** SA

**Correct Marks :** 4 **Wrong Marks :** 0

If the line joining the points  $(-1, 2, 5)$  and  $(3, 4, -10)$  intersects the  $xy$ -plane at the

point  $(x, y, z)$ , then  $\frac{y}{x}$  is equal to \_\_\_\_\_.

**Response Type:** Numeric

**Evaluation Required For SA:** Yes

**Show Word Count:** Yes

**Answers Type:** Range

**Possible Answers :**

8 to 8

Question Number : 24 Question Type : SA

Correct Marks : 4 Wrong Marks : 0

यदि बिंदुओं  $(-1, 2, 5)$  तथा  $(3, 4, -10)$  को मिलाने वाली रेखा  $xy$ -समतल को बिंदु  $(x, y, z)$  पर काटती है,

तो  $\frac{y}{x}$  का मान है \_\_\_\_\_ ।

Response Type: Numeric

Evaluation Required For SA: Yes

Show Word Count: Yes

Answers Type: Range

Possible Answers :

8 to 8

Question Number : 24 Question Type : SA

Correct Marks : 4 Wrong Marks : 0

बिंदुओं  $(-1, 2, 5)$  અને  $(3, 4, -10)$  ને જોડતી રેખા

$xy$ -સમતલને બિંદુ  $(x, y, z)$  માં છેદતી હોય તો  $\frac{y}{x} =$   
\_\_\_\_\_ થાય.

Response Type: Numeric

Evaluation Required For SA: Yes

Show Word Count: Yes

Answers Type: Range

Possible Answers :

8 to 8

Question Number : 25 Question Type : SA

Correct Marks : 4 Wrong Marks : 0

Let  $a, b \in \mathbb{R}$  and  $a > 0$ . If the tangent at the point  $(2, 2)$  to the circle  $x^2 + y^2 = 8$  touches the parabola  $y^2 = 4a(x - b)$ , then  $b - a$  is equal to \_\_\_\_\_.

Response Type: Numeric

Evaluation Required For SA: Yes

Show Word Count: Yes

Answers Type: Range

Possible Answers :

4 to 4

Question Number : 25 Question Type : SA

Correct Marks : 4 Wrong Marks : 0

માના  $a, b \in \mathbb{R}$  તથા  $a > 0$  હૈં । યદિ વૃત્ત  $x^2 + y^2 = 8$  કે બિંદુ  $(2, 2)$  પર ઝીંચી ગઈ સ્પર્શરેખા, પરવલય  $y^2 = 4a(x - b)$  કો સ્પર્શ કરતી હૈ, તો  $b - a$  બરાબર હૈ  
\_\_\_\_\_ ।

Response Type: Numeric

Evaluation Required For SA: Yes

Show Word Count: Yes

Answers Type: Range

Possible Answers :

4 to 4

Question Number : 25 Question Type : SA

Correct Marks : 4 Wrong Marks : 0

ધારોકે  $a, b \in \mathbb{R}$  અને  $a > 0$ . જો વર્તુળ  $x^2 + y^2 = 8$  નો બિંદુ  $(2, 2)$  આગળનો સ્પર્શક, પરવલય  $y^2 = 4a(x - b)$  ને સ્પર્શે તો  $b - a = \underline{\hspace{2cm}}$  થાય.

Response Type: Numeric

Evaluation Required For SA: Yes

Show Word Count: Yes

Answers Type: Range

Possible Answers :

4 to 4

## Aptitude Test

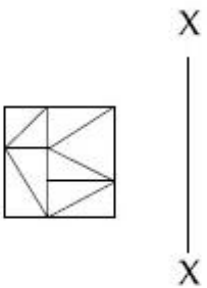
Section Id :	40503621
Section Number :	2
Section type :	Online
Mandatory or Optional:	Mandatory
Number of Questions:	50
Number of Questions to be attempted:	50
Section Marks:	200

Sub-Section Number:	1
Sub-Section Id:	40503630
Question Shuffling Allowed :	Yes

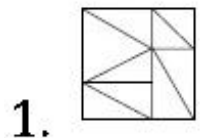
Question Number : 26 Question Type : MCQ Option Shuffling : Yes

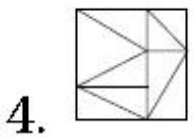
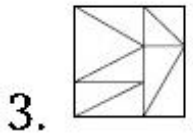
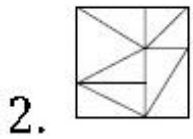
Correct Marks : 4 Wrong Marks : 1

Which one of the answer figures is the correct mirror image of the problem figure with respect to X - X ?



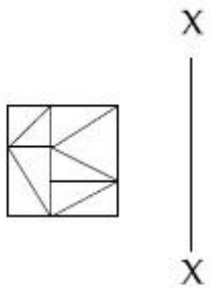
Options :



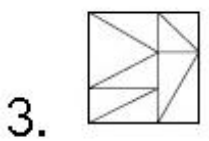
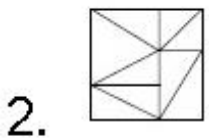
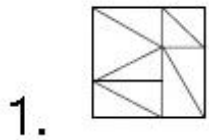


Question Number : 26 Question Type : MCQ Option Shuffling : Yes  
Correct Marks : 4 Wrong Marks : 1

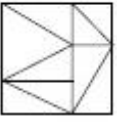
उत्तर आकृतियों में से कौनसी आकृति दी गयी प्रश्न आकृति का X - X से सम्बंधित सही दर्पण प्रतिबिम्ब है ?



Options :



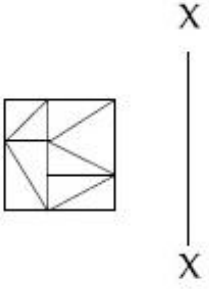
4.



Question Number : 26 Question Type : MCQ Option Shuffling : Yes

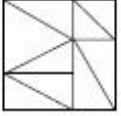
Correct Marks : 4 Wrong Marks : 1

જવાબ આકૃતિઓમાંની કઈ આકૃતિ પ્રશ્ન આકૃતિનું X - X ની સાપેક્ષ દર્પણ પ્રતિબિંબ (mirror image) છે ?

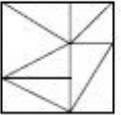


Options :

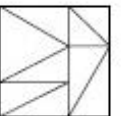
1.



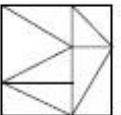
2.



3.



4.

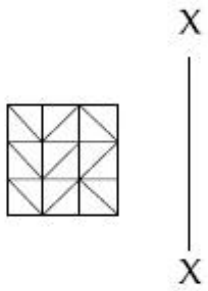


Question Number : 27 Question Type : MCQ Option Shuffling : Yes

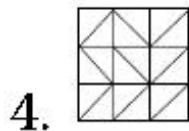
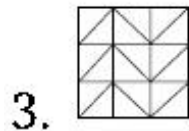
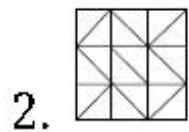
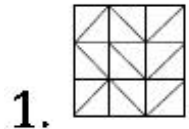
Correct Marks : 4 Wrong Marks : 1



Which one of the answer figures is the correct mirror image of the problem figure with respect to X - X?



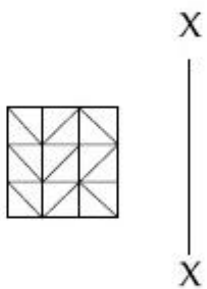
Options :



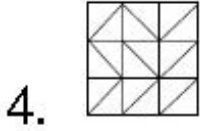
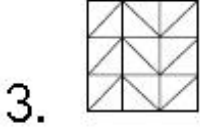
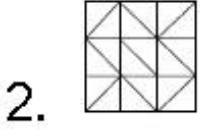
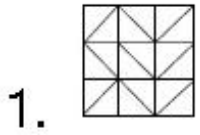
Question Number : 27 Question Type : MCQ Option Shuffling : Yes

Correct Marks : 4 Wrong Marks : 1

उत्तर आकृतियों में से कौनसी आकृति दी गयी प्रश्न आकृति का X - X से सम्बंधित सही दर्पण प्रतिबिम्ब है?



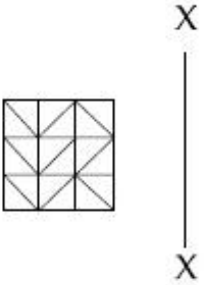
Options :



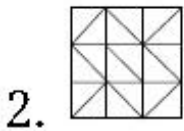
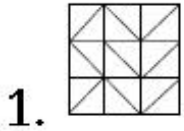
Question Number : 27 Question Type : MCQ Option Shuffling : Yes

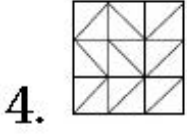
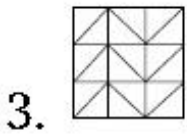
Correct Marks : 4 Wrong Marks : 1

જવાબ આકૃતિઓમાંની કઈ આકૃતિ પ્રશ્ન આકૃતિનું X - X ની સાપેક્ષ દર્પણ પ્રતિબિંબ (mirror image) છે ?



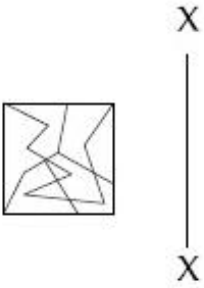
Options :



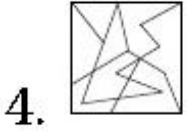
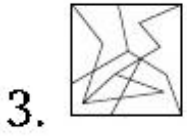
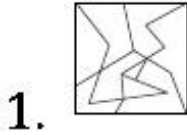


Question Number : 28 Question Type : MCQ Option Shuffling : Yes  
 Correct Marks : 4 Wrong Marks : 1

Which one of the answer figures is the correct mirror image of the problem figure with respect to X - X?



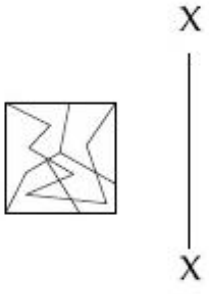
Options :



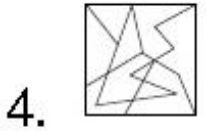
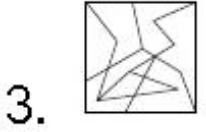
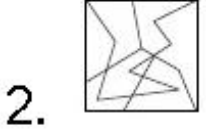
Question Number : 28 Question Type : MCQ Option Shuffling : Yes

Correct Marks : 4 Wrong Marks : 1

उत्तर आकृतियों में से कौनसी आकृति दी गयी प्रश्न आकृति का X - X से सम्बंधित सही दर्पण प्रतिबिम्ब है ?



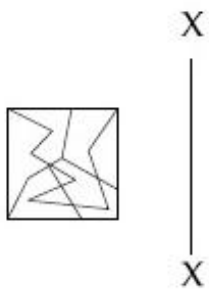
Options :



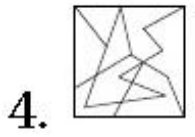
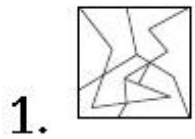
Question Number : 28 Question Type : MCQ Option Shuffling : Yes

Correct Marks : 4 Wrong Marks : 1

જવાબ આકૃતિઓમાંની કઈ આકૃતિ પ્રશ્ન આકૃતિનું X - X ની સાપેક્ષ દર્પણ પ્રતિબિંબ (mirror image) છે ?

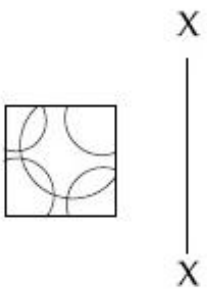


Options :

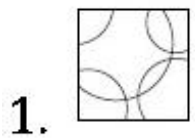


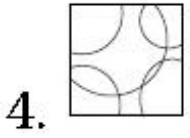
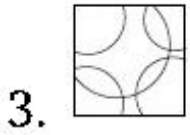
Question Number : 29 Question Type : MCQ Option Shuffling : Yes  
Correct Marks : 4 Wrong Marks : 1

Which one of the answer figures is the correct mirror image of the problem figure with respect to X - X?



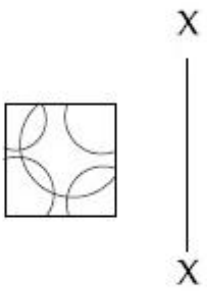
Options :



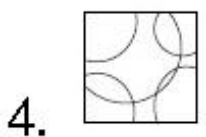
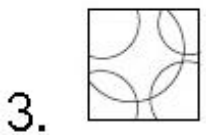
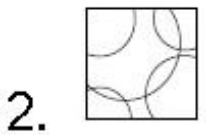
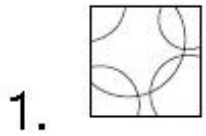


Question Number : 29 Question Type : MCQ Option Shuffling : Yes  
Correct Marks : 4 Wrong Marks : 1

उत्तर आकृतियों में से कौनसी आकृति दी गयी प्रश्न आकृति का X - X से सम्बंधित सही दर्पण प्रतिबिम्ब है ?

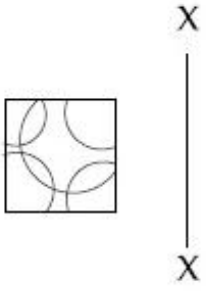


Options :

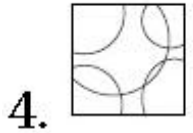
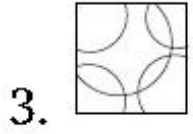
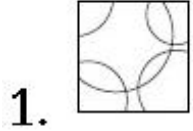


Question Number : 29 Question Type : MCQ Option Shuffling : Yes  
Correct Marks : 4 Wrong Marks : 1

જવાબ આકૃતિઓમાંની કઈ આકૃતિ પ્રશ્ન આકૃતિનું X - X ની સાપેક્ષ દર્પણ પ્રતિબિંબ (mirror image) છે ?



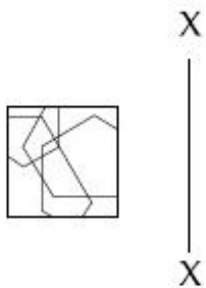
Options :



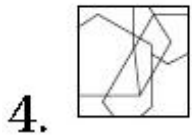
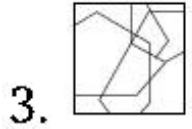
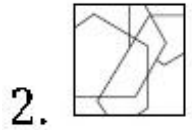
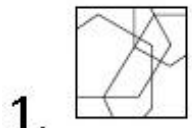
Question Number : 30 Question Type : MCQ Option Shuffling : Yes

Correct Marks : 4 Wrong Marks : 1

Which one of the answer figures is the correct mirror image of the problem figure with respect to X - X ?

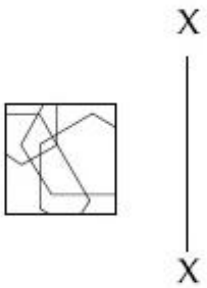


Options :

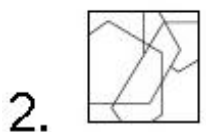
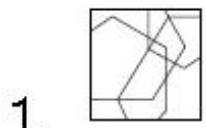


Question Number : 30 Question Type : MCQ Option Shuffling : Yes  
Correct Marks : 4 Wrong Marks : 1

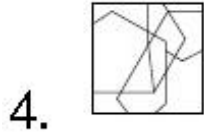
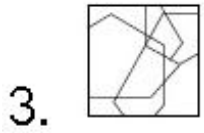
उत्तर आकृतियों में से कौनसी आकृति दी गयी प्रश्न आकृति का X - X से सम्बंधित सही दर्पण प्रतिबिम्ब है?



Options :

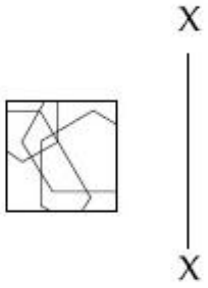




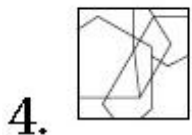
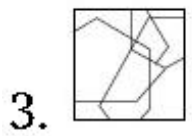
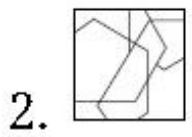
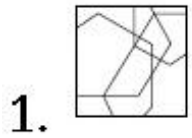


Question Number : 30 Question Type : MCQ Option Shuffling : Yes  
Correct Marks : 4 Wrong Marks : 1

જવાબ આકૃતિઓમાંની કઈ આકૃતિ પ્રશ્ન આકૃતિનું X - X ની સાપેક્ષ દર્પણ પ્રતિબિંબ (mirror image) છે ?




Options :



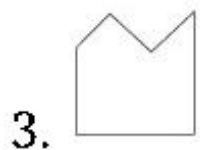
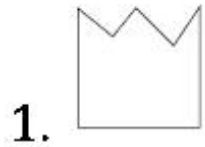
Question Number : 31 Question Type : MCQ Option Shuffling : Yes

Correct Marks : 4 Wrong Marks : 1

The problem figure shows the top view of an object. Identify the correct elevation from amongst the answer figures looking in the direction of the arrow.



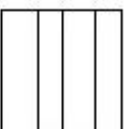
Options :



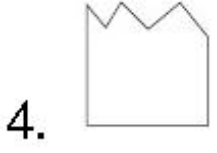
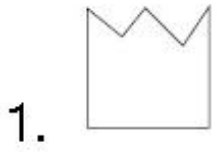
Question Number : 31 Question Type : MCQ Option Shuffling : Yes

Correct Marks : 4 Wrong Marks : 1

प्रश्न आकृति में किसी वस्तु का ऊपरी दृश्य दिखाया गया है। तीर की दिशा में देखते हुए उत्तर आकृतियों में से इसका सही सम्मुख दृश्य पहचानिये।




Options :



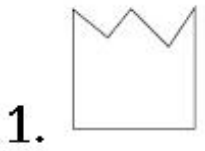
Question Number : 31 Question Type : MCQ Option Shuffling : Yes

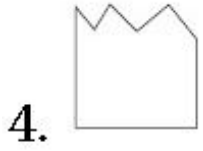
Correct Marks : 4 Wrong Marks : 1

પ્રશ્ન આકૃતિ એક વસ્તુનું ઉપરી દ્રશ્ય (top view) દર્શાવે છે. તીરની દિશામાં જોતાં, આનું સાચું ઉન્નત દ્રશ્ય (elevation) જવાબ આકૃતિઓમાંથી શોધો.



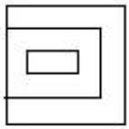
Options :



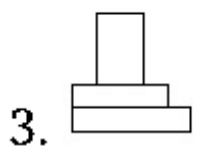
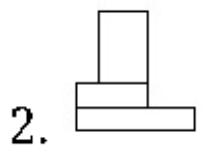
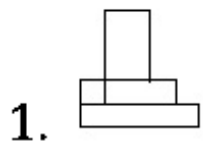


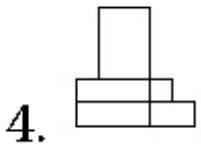
Question Number : 32 Question Type : MCQ Option Shuffling : Yes  
Correct Marks : 4 Wrong Marks : 1

The problem figure shows the top view of an object. Identify the correct elevation from amongst the answer figures looking in the direction of the arrow.



Options :

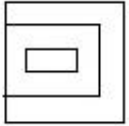




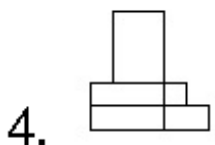
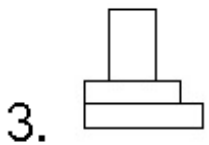
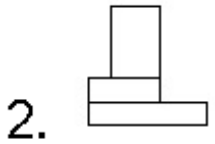
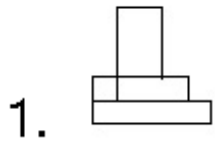
Question Number : 32 Question Type : MCQ Option Shuffling : Yes

Correct Marks : 4 Wrong Marks : 1

प्रश्न आकृति में किसी वस्तु का ऊपरी दृश्य दिखाया गया है। तीर की दिशा में देखते हुए उत्तर आकृतियों में से इसका सही सम्मुख दृश्य पहचानिये।



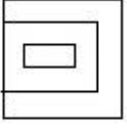
Options :



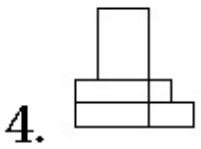
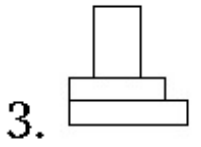
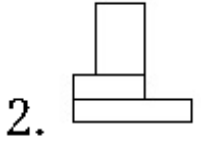
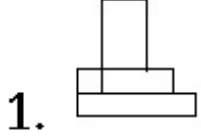
Question Number : 32 Question Type : MCQ Option Shuffling : Yes

Correct Marks : 4 Wrong Marks : 1

પ્રશ્ન આકૃતિ એક વસ્તુનું ઉપરી દૃશ્ય (top view) દર્શાવે છે. તીરની દિશામાં જોતાં, આનું સાચું ઉન્નત દૃશ્ય (elevation) જવાબ આકૃતિઓમાંથી શોધો.



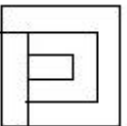
Options :



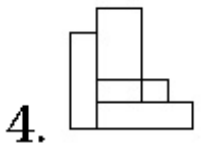
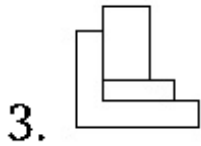
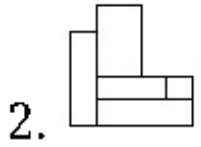
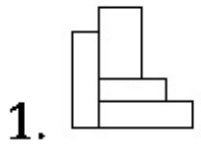
Question Number : 33 Question Type : MCQ Option Shuffling : Yes

Correct Marks : 4 Wrong Marks : 1

The problem figure shows the top view of an object. Identify the correct elevation from amongst the answer figures looking in the direction of the arrow.



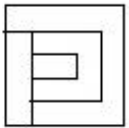
Options :



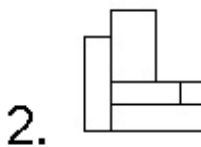
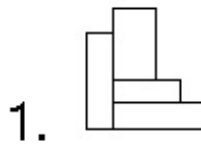
Question Number : 33 Question Type : MCQ Option Shuffling : Yes

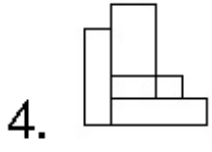
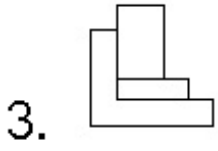
Correct Marks : 4 Wrong Marks : 1

प्रश्न आकृति में किसी वस्तु का ऊपरी दृश्य दिखाया गया है। तीर की दिशा में देखते हुए उत्तर आकृतियों में से इसका सही सम्मुख दृश्य पहचानिये।



Options :

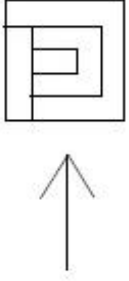




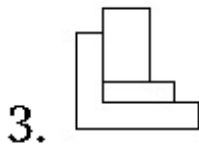
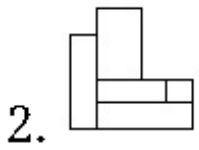
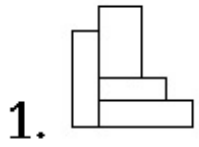
Question Number : 33 Question Type : MCQ Option Shuffling : Yes

Correct Marks : 4 Wrong Marks : 1

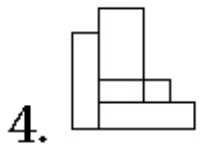
પ્રશ્ન આકૃતિ એક વસ્તુનું ઉપરી દૃશ્ય (top view) દર્શાવે છે. તીરની દિશામાં જોતાં, આનું સાચું ઉન્નત દૃશ્ય (elevation) જવાબ આકૃતિઓમાંથી શોધો.



Options :

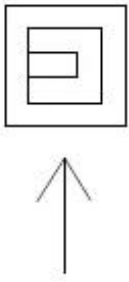




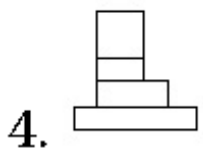
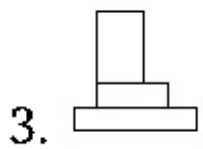
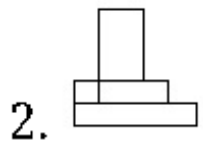
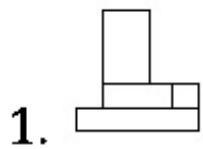


Question Number : 34 Question Type : MCQ Option Shuffling : Yes  
 Correct Marks : 4 Wrong Marks : 1

The problem figure shows the top view of an object. Identify the correct elevation from amongst the answer figures looking in the direction of the arrow.




Options :

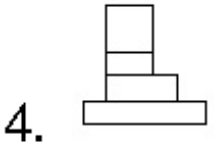
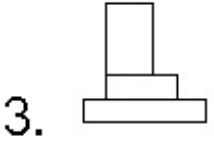
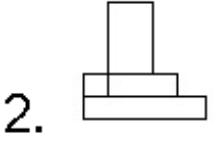
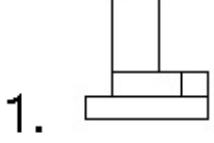


Question Number : 34 Question Type : MCQ Option Shuffling : Yes  
 Correct Marks : 4 Wrong Marks : 1

प्रश्न आकृति में किसी वस्तु का ऊपरी दृश्य दिखाया गया है। तीर की दिशा में देखते हुए उत्तर आकृतियों में से इसका सही सम्मुख दृश्य पहचानिये।




Options :



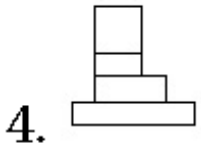
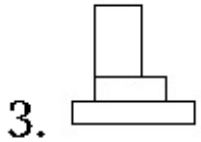
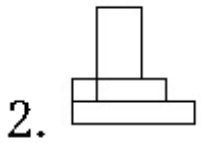
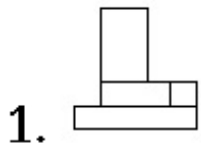
Question Number : 34 Question Type : MCQ Option Shuffling : Yes

Correct Marks : 4 Wrong Marks : 1

प्रश्न आकृति એક વસ્તુનું ઉપરી દષ્ટ (top view) દર્શાવે છે. તીરની દિશામાં જોતાં, આનું સાચું ઉન્નત દષ્ટ (elevation) જવાબ આકૃતિઓમાંથી શોધો.



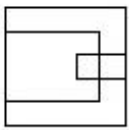
Options :



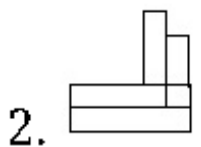
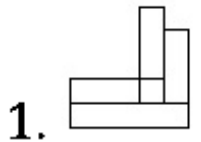
Question Number : 35 Question Type : MCQ Option Shuffling : Yes

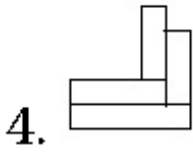
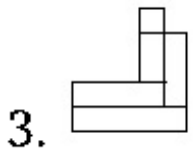
Correct Marks : 4 Wrong Marks : 1

The problem figure shows the top view of an object. Identify the correct elevation from amongst the answer figures looking in the direction of the arrow.



Options :

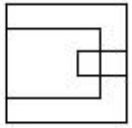




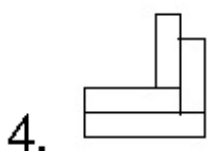
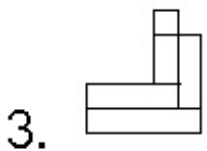
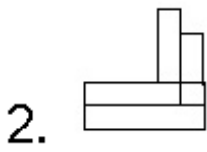
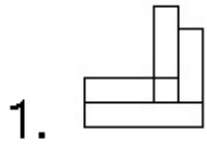
Question Number : 35 Question Type : MCQ Option Shuffling : Yes

Correct Marks : 4 Wrong Marks : 1

प्रश्न आकृति में किसी वस्तु का ऊपरी दृश्य दिखाया गया है। तीर की दिशा में देखते हुए उत्तर आकृतियों में से इसका सही सम्मुख दृश्य पहचानिये।



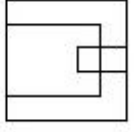
Options :



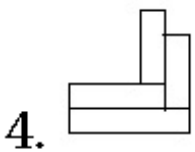
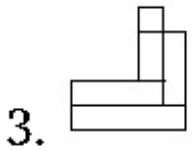
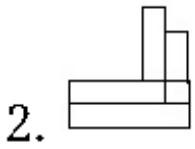
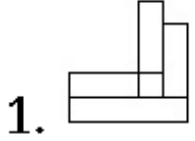
Question Number : 35 Question Type : MCQ Option Shuffling : Yes

Correct Marks : 4 Wrong Marks : 1

પ્રશ્ન આકૃતિ એક વસ્તુનું ઉપરી દષ્ય (top view) દર્શાવે છે. તીરની દિશામાં જોતાં, આનું સાચું ઉન્નત દષ્ય (elevation) જવાબ આકૃતિઓમાંથી શોધો.



Options :



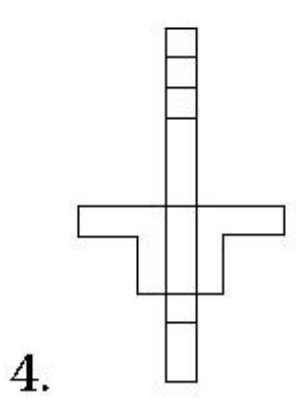
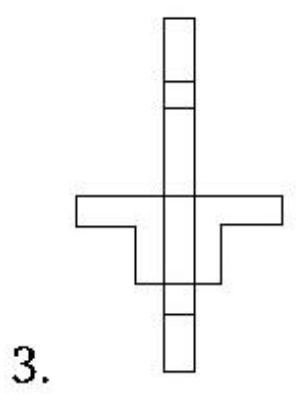
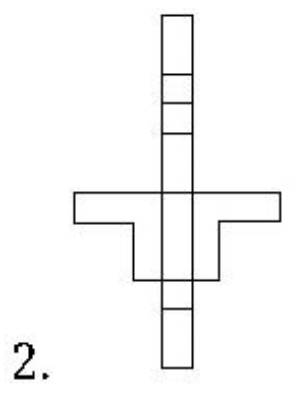
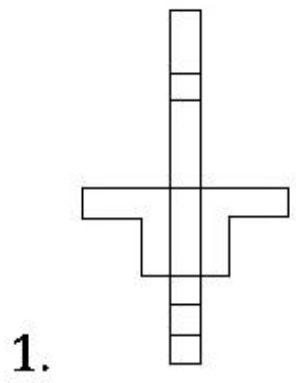
Question Number : 36 Question Type : MCQ Option Shuffling : Yes

Correct Marks : 4 Wrong Marks : 1

The 3 - D figure shows the view of an object. Identify the correct view when the figure is opened up, from amongst the answer figures.

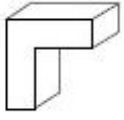


Options :



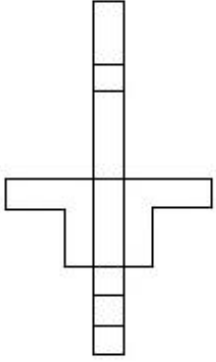
Question Number : 36 Question Type : MCQ Option Shuffling : Yes  
Correct Marks : 4 Wrong Marks : 1

3 - D प्रश्न आकृति में एक वस्तु के एक दृश्य को दिखाया गया है। उत्तर दृश्यों में से, प्रश्न वस्तु के खुल जाने का सही दृश्य पहचानिये।

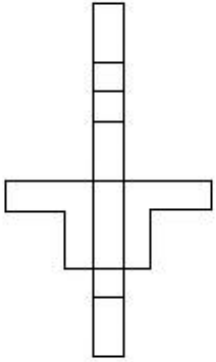


Options :

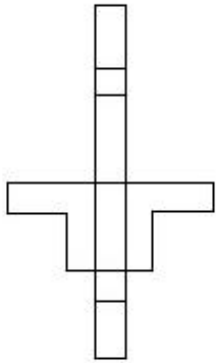
1.



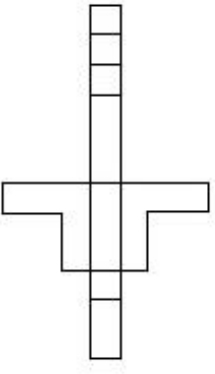
2.



3.



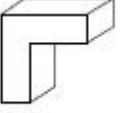
4.



Question Number : 36 Question Type : MCQ Option Shuffling : Yes

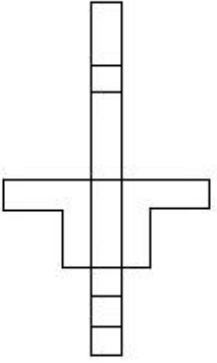
Correct Marks : 4 Wrong Marks : 1

3 - D પ્રશ્ન આકૃતિ એક વસ્તુનું દૃશ્ય બતાવે છે. આ આકૃતિને ખોલી દેવામાં આવે ત્યારે તેનું સાચું દૃશ્ય જવાબ આકૃતિઓમાંથી શોધો.

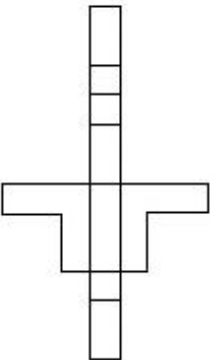


Options :

1.

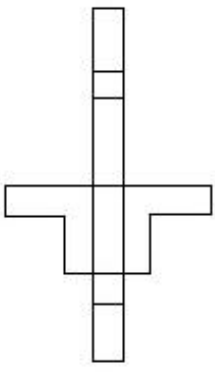


2.

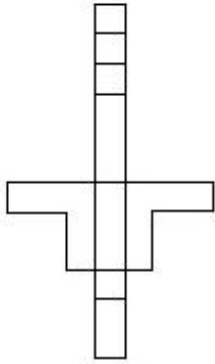




3.

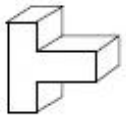


4.



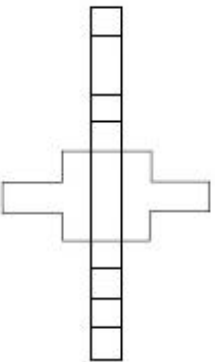
Question Number : 37 Question Type : MCQ Option Shuffling : Yes  
Correct Marks : 4 Wrong Marks : 1

The 3 - D figure shows the view of an object. Identify the correct view when the figure is opened up, from amongst the answer figures.

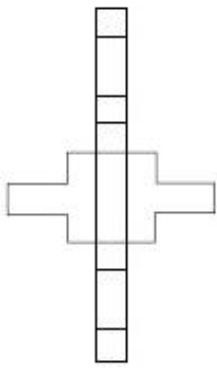


Options :

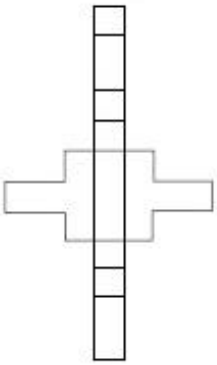
1.



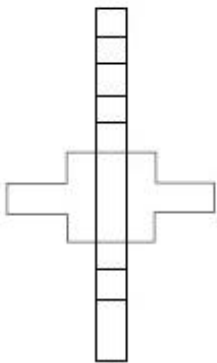
2.



3.



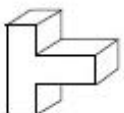
4.



Question Number : 37 Question Type : MCQ Option Shuffling : Yes

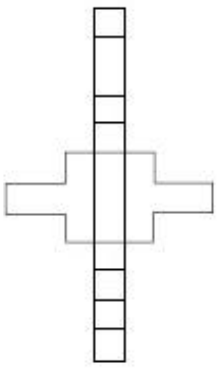
Correct Marks : 4 Wrong Marks : 1

3 - D प्रश्न आकृति में एक वस्तु के एक दृश्य को दिखाया गया है। उत्तर दृश्यों में से, प्रश्न वस्तु के खुल जाने का सही दृश्य पहचानिये।

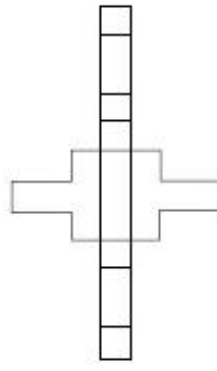


Options :

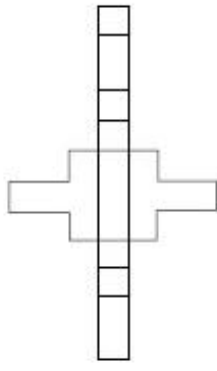
1.



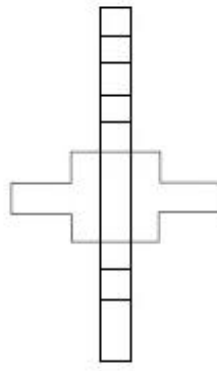
2.



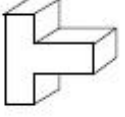
3.



4.

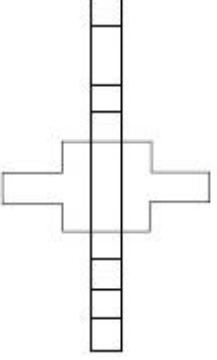


3 - D પ્રશ્ન આકૃતિ એક વસ્તુનું દશ્ય બતાવે છે. આ આકૃતિને ખોલી દેવામાં આવે ત્યારે તેનું સાચું દશ્ય જવાબ આકૃતિઓમાંથી શોધો.

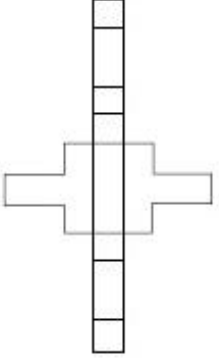


Options :

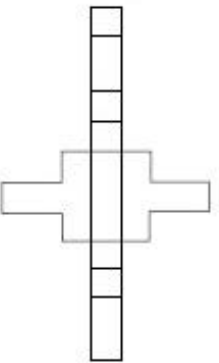
1.



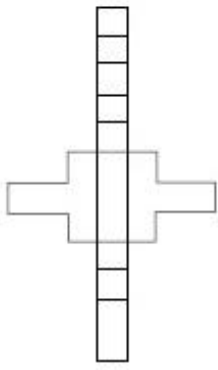
2.



3.



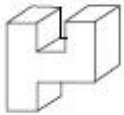
4.



Question Number : 38 Question Type : MCQ Option Shuffling : Yes

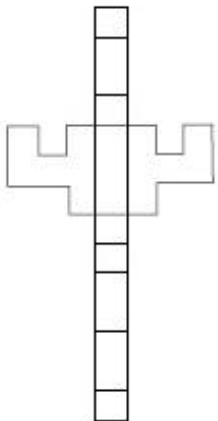
Correct Marks : 4 Wrong Marks : 1

The 3 - D figure shows the view of an object. Identify the correct view when the figure is opened up, from amongst the answer figures.

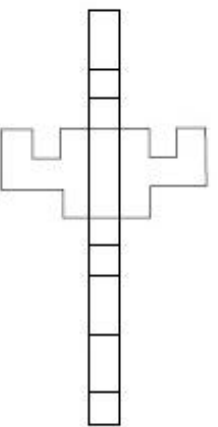


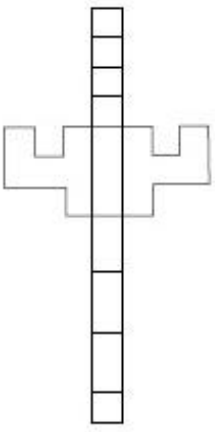
Options :

1.

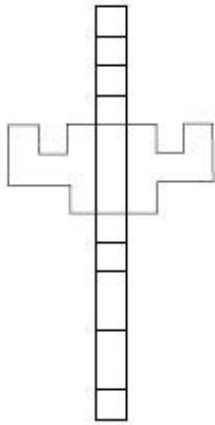


2.





3.

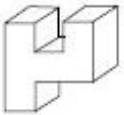


4.

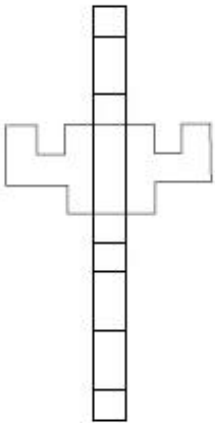
Question Number : 38 Question Type : MCQ Option Shuffling : Yes

Correct Marks : 4 Wrong Marks : 1

3 - D प्रश्न आकृति में एक वस्तु के एक दृश्य को दिखाया गया है। उत्तर दृश्यों में से, प्रश्न वस्तु के खुल जाने का सही दृश्य पहचानिये।

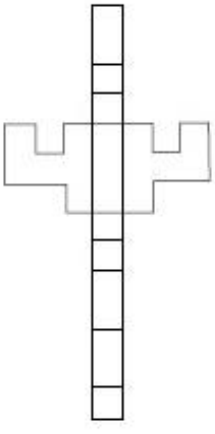


Options :

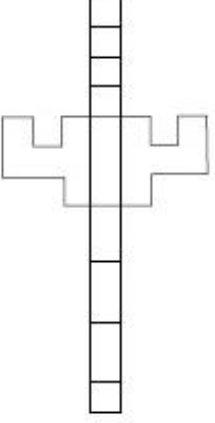


1.

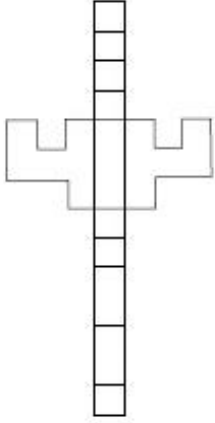
2.



3.



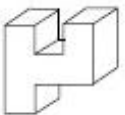
4.



Question Number : 38 Question Type : MCQ Option Shuffling : Yes

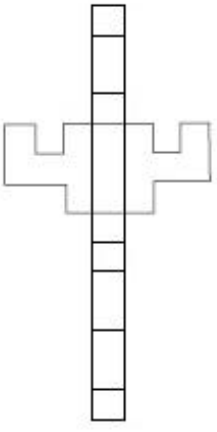
Correct Marks : 4 Wrong Marks : 1

3 - D પ્રશ્ન આકૃતિ એક વસ્તુનું દૃશ્ય ખતાવે છે. આ આકૃતિને ખોલી દેવામાં આવે ત્યારે તેનું સાચું દૃશ્ય જવાબ આકૃતિઓમાંથી શોધો.

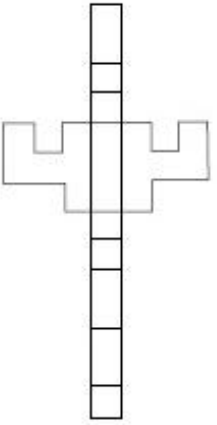


Options :

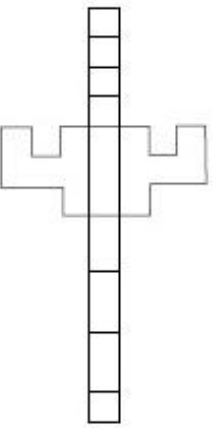
1.



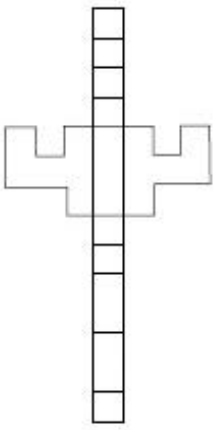
2.



3.







4.

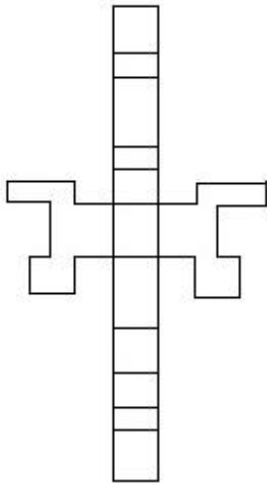
Question Number : 39 Question Type : MCQ Option Shuffling : Yes

Correct Marks : 4 Wrong Marks : 1

The 3 - D figure shows the view of an object. Identify the correct view when the figure is opened up, from amongst the answer figures.

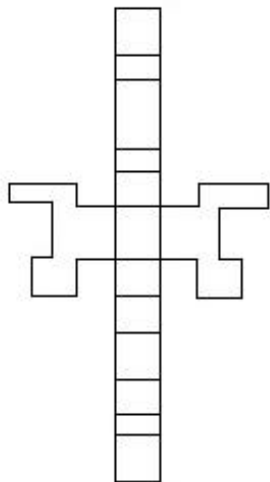


Options :

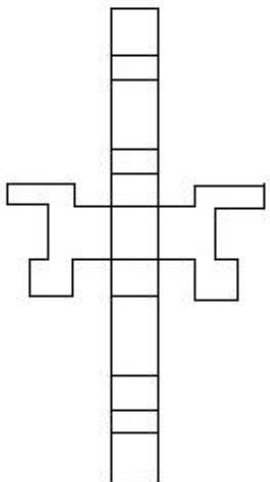


1.

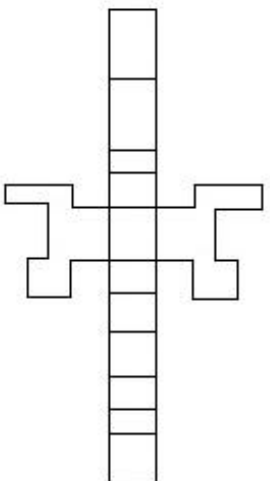
2.



3.



4.

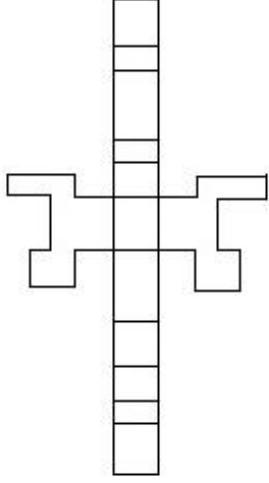


Question Number : 39 Question Type : MCQ Option Shuffling : Yes  
Correct Marks : 4 Wrong Marks : 1

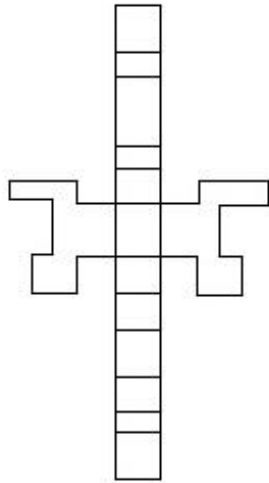
3 - D प्रश्न आकृति में एक वस्तु के एक दृश्य को दिखाया गया है। उत्तर दृश्यों में से, प्रश्न वस्तु के खुल जाने का सही दृश्य पहचानिये।



Options :

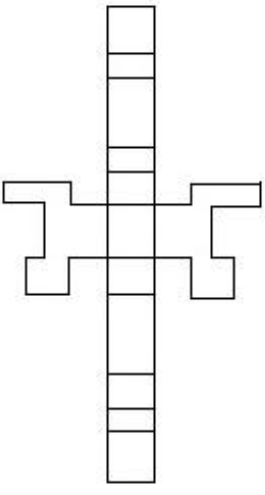


1.

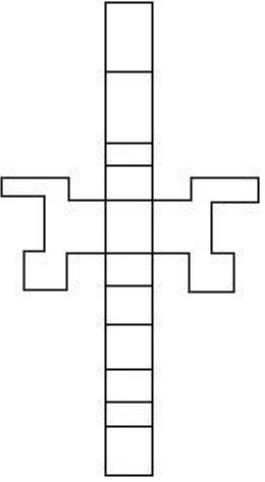


2.

3.



4.



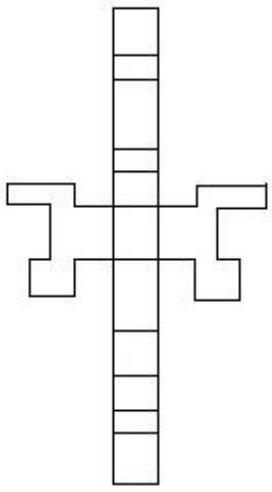
Question Number : 39 Question Type : MCQ Option Shuffling : Yes

Correct Marks : 4 Wrong Marks : 1

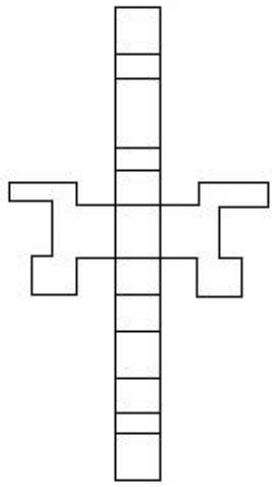
3 - D પ્રશ્ન આકૃતિ એક વસ્તુનું દૃશ્ય ખતાવે છે. આ આકૃતિને ખોલી દેવામાં આવે ત્યારે તેનું સાચું દૃશ્ય જવાબ આકૃતિઓમાંથી શોધો.



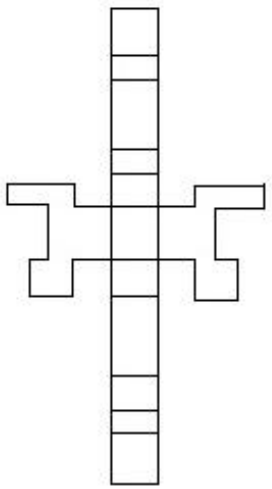
Options :



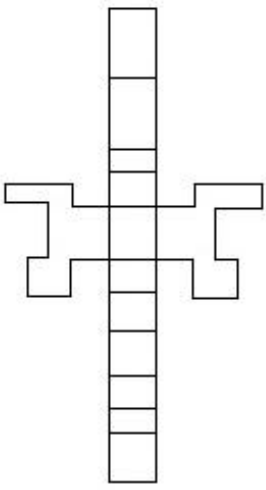
1.



2.



3.



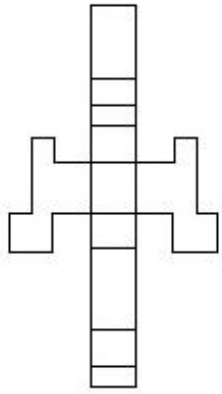
4.

Question Number : 40 Question Type : MCQ Option Shuffling : Yes  
 Correct Marks : 4 Wrong Marks : 1

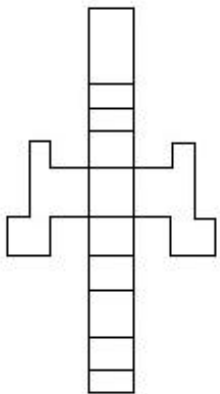
The 3 - D figure shows the view of an object. Identify the correct view when the figure is opened up, from amongst the answer figures.



Options :

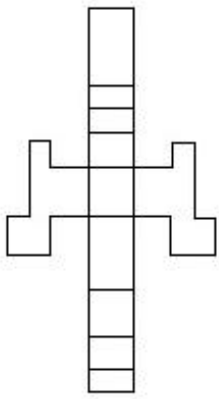


1.

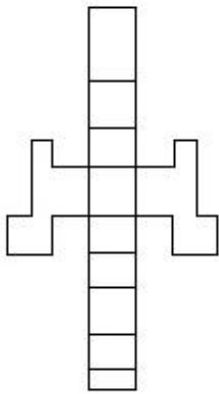


2.

3.



4.



Question Number : 40 Question Type : MCQ Option Shuffling : Yes

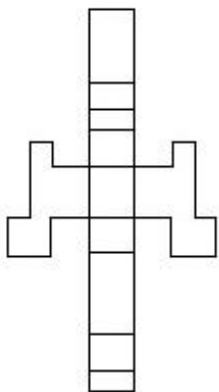
Correct Marks : 4 Wrong Marks : 1

3 - D प्रश्न आकृति में एक वस्तु के एक दृश्य को दिखाया गया है। उत्तर दृश्यों में से, प्रश्न वस्तु के खुल जाने का सही दृश्य पहचानिये।

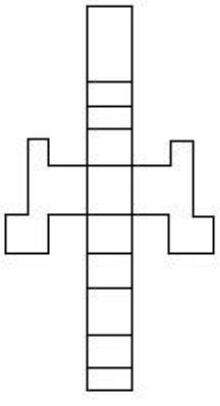


Options :

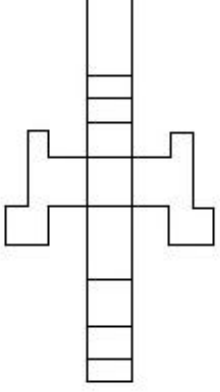
1.



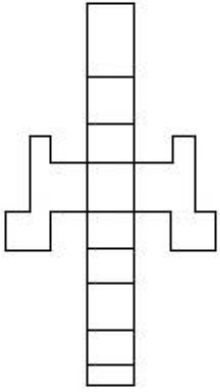
2.



3.



4.



Question Number : 40 Question Type : MCQ Option Shuffling : Yes

Correct Marks : 4 Wrong Marks : 1

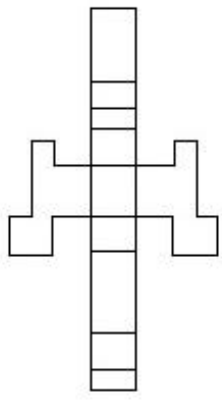
3 - D પ્રશ્ન આકૃતિ એક વસ્તુનું દૃશ્ય બતાવે છે. આ આકૃતિને ખોલી દેવામાં આવે ત્યારે તેનું સાચું દૃશ્ય જવાબ આકૃતિઓમાંથી શોધો.



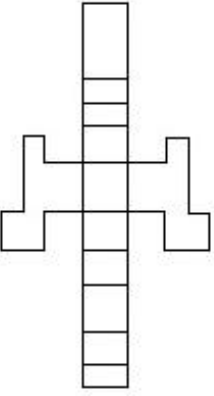
Options :



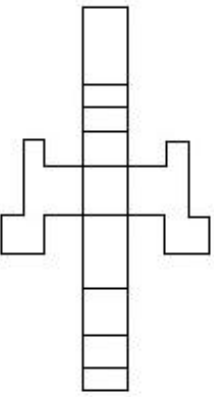
1.



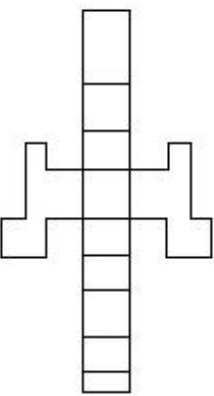
2.



3.



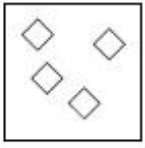
4.



Question Number : 41 Question Type : MCQ Option Shuffling : Yes

Correct Marks : 4 Wrong Marks : 1

The problem figure shows the top view of objects. Looking in the direction of the arrow, identify the correct elevation, from amongst the answer figures.



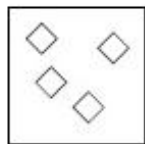
Options :



Question Number : 41 Question Type : MCQ Option Shuffling : Yes

Correct Marks : 4 Wrong Marks : 1

प्रश्न आकृति में वस्तुओं का ऊपरी दृश्य दिखाया गया है। तीर की सिंह में देखते हुए उत्तर आकृतियों में से सही सम्मुख दृश्य पहचानिये।

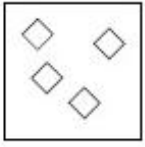


Options :

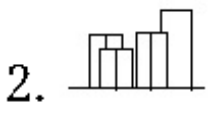


Question Number : 41 Question Type : MCQ Option Shuffling : Yes  
 Correct Marks : 4 Wrong Marks : 1

પ્રશ્ન આકૃતિ કોઈક વસ્તુઓનું ઉપરી દ્રશ્ય (top view) બતાવે છે. તીરની દિશામાં જોતાં, આનું સાચું ઉન્નત દ્રશ્ય (elevation) જવાબ આકૃતિઓમાંથી શોધો.



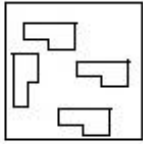
Options :



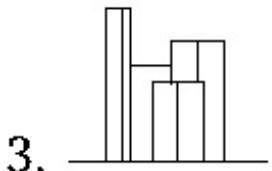
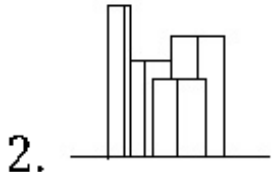



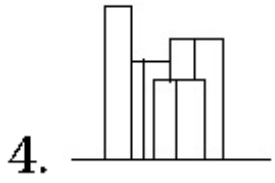
Question Number : 42 Question Type : MCQ Option Shuffling : Yes  
 Correct Marks : 4 Wrong Marks : 1

The problem figure shows the top view of objects. Looking in the direction of the arrow, identify the correct elevation, from amongst the answer figures.



Options :

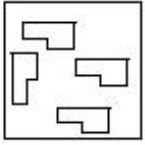




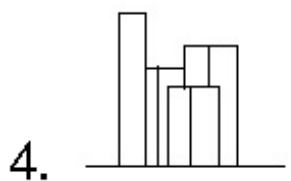
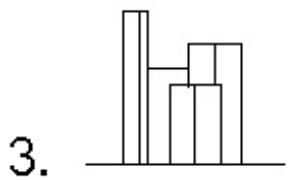
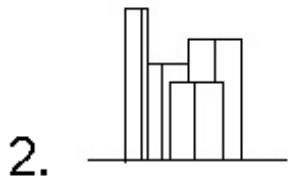
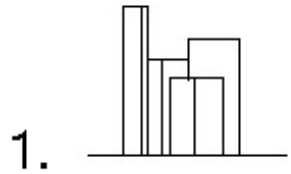
Question Number : 42 Question Type : MCQ Option Shuffling : Yes

Correct Marks : 4 Wrong Marks : 1

प्रश्न आकृति में वस्तुओं का ऊपरी दृश्य दिखाया गया है। तीर की सिंह में देखते हुए उत्तर आकृतियों में से सही सम्मुख दृश्य पहचानिये।



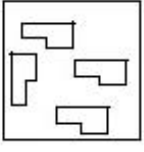
Options :



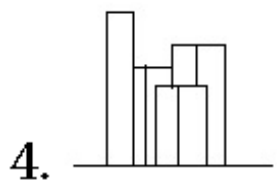
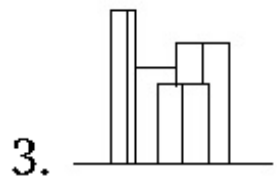
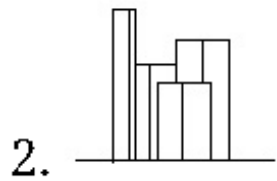
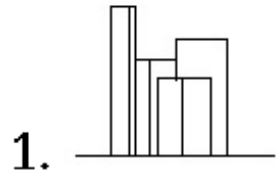
Question Number : 42 Question Type : MCQ Option Shuffling : Yes

Correct Marks : 4 Wrong Marks : 1

પ્રશ્ન આકૃતિ કોઈક વસ્તુઓનું ઉપરી દ્રશ્ય (top view) બતાવે છે. તીરની દિશામાં જોતાં, આનું સાચું ઉન્નત દ્રશ્ય (elevation) જવાબ આકૃતિઓમાંથી શોધો.



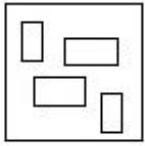
Options :



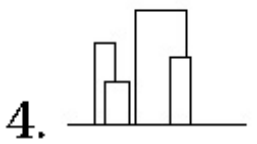
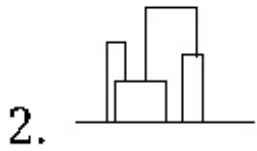
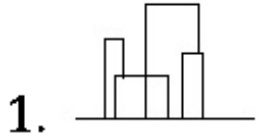
Question Number : 43 Question Type : MCQ Option Shuffling : Yes

Correct Marks : 4 Wrong Marks : 1

The problem figure shows the top view of objects. Looking in the direction of the arrow, identify the correct elevation, from amongst the answer figures.



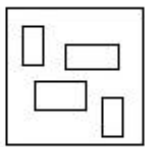
Options :



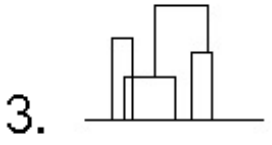
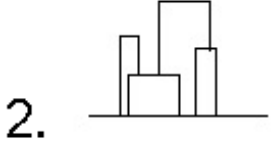
Question Number : 43 Question Type : MCQ Option Shuffling : Yes

Correct Marks : 4 Wrong Marks : 1

प्रश्न आकृति में वस्तुओं का ऊपरी दृश्य दिखाया गया है। तीर की सिंह में देखते हुए उत्तर आकृतियों में से सही सम्मुख दृश्य पहचानिये।



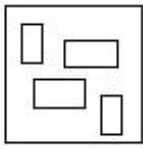
Options :




Question Number : 43 Question Type : MCQ Option Shuffling : Yes

Correct Marks : 4 Wrong Marks : 1

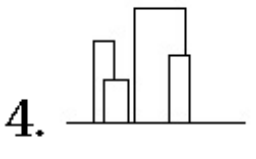
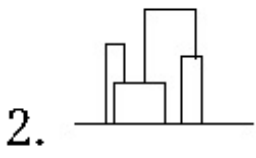
પ્રશ્ન આકૃતિ કોઈક વસ્તુઓનું ઉપરી દ્રશ્ય (top view) બતાવે છે. તીરની દિશામાં જોતાં, આનું સાચું ઉન્નત દ્રશ્ય (elevation) જવાબ આકૃતિઓમાંથી શોધો.



Options :

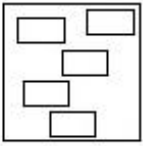




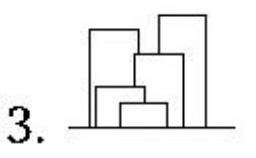
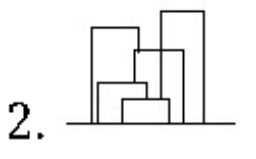
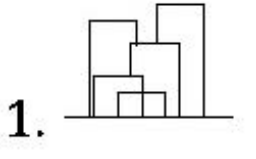


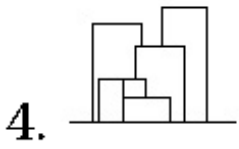
Question Number : 44 Question Type : MCQ Option Shuffling : Yes  
 Correct Marks : 4 Wrong Marks : 1

The problem figure shows the top view of objects. Looking in the direction of the arrow, identify the correct elevation, from amongst the answer figures.



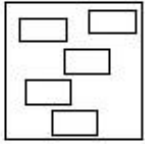
Options :



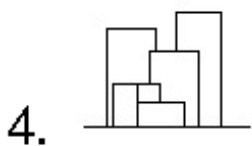
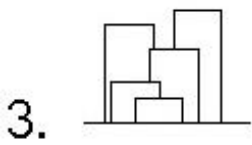
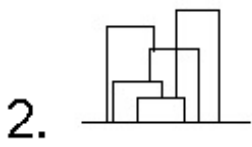
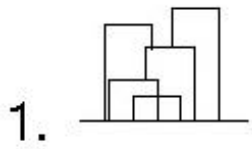


Question Number : 44 Question Type : MCQ Option Shuffling : Yes  
Correct Marks : 4 Wrong Marks : 1

प्रश्न आकृति में वस्तुओं का ऊपरी दृश्य दिखाया गया है। तीर की सिंह में देखते हुए उत्तर आकृतियों में से सही सम्मुख दृश्य पहचानिये।




Options :

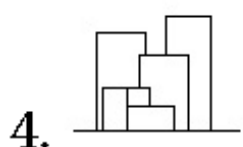
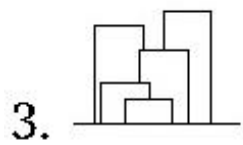
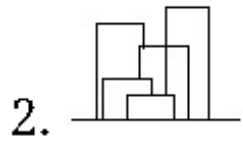
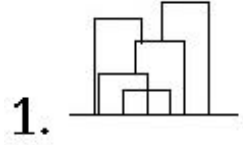


Question Number : 44 Question Type : MCQ Option Shuffling : Yes  
Correct Marks : 4 Wrong Marks : 1

પ્રશ્ન આકૃતિ કોઈક વસ્તુઓનું ઉપરી દૃશ્ય (top view) બતાવે છે. તીરની દિશામાં જોતાં, આનું સાચું ઉન્નત દૃશ્ય (elevation) જવાબ આકૃતિઓમાંથી શોધો.



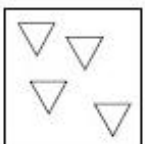
Options :



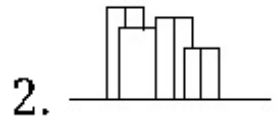
Question Number : 45 Question Type : MCQ Option Shuffling : Yes

Correct Marks : 4 Wrong Marks : 1

The problem figure shows the top view of objects. Looking in the direction of the arrow, identify the correct elevation, from amongst the answer figures.



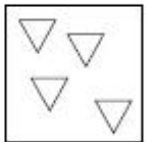
Options :



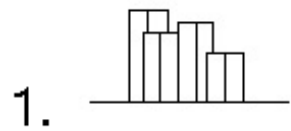
Question Number : 45 Question Type : MCQ Option Shuffling : Yes

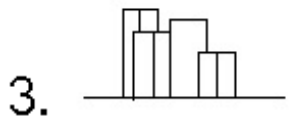
Correct Marks : 4 Wrong Marks : 1

प्रश्न आकृति में वस्तुओं का ऊपरी दृश्य दिखाया गया है। तीर की सिंह में देखते हुए उत्तर आकृतियों में से सही सम्मुख दृश्य पहचानिये।



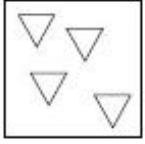
Options :



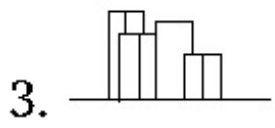
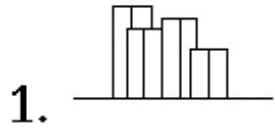


Question Number : 45 Question Type : MCQ Option Shuffling : Yes  
 Correct Marks : 4 Wrong Marks : 1

પ્રશ્ન આકૃતિ કોઈક વસ્તુઓનું ઉપરી દૃશ્ય (top view) બતાવે છે. તીરની દિશામાં જોતાં, આનું સાચું ઉન્નત દૃશ્ય (elevation) જવાબ આકૃતિઓમાંથી શોધો.



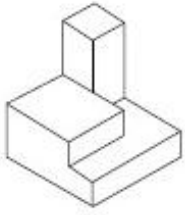
Options :



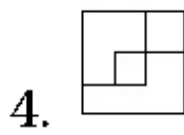
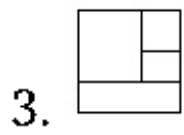
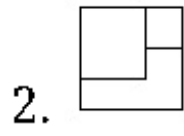
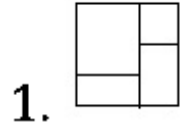
Question Number : 46 Question Type : MCQ Option Shuffling : Yes

Correct Marks : 4 Wrong Marks : 1

The 3 - D figure shows the view of an object. Identify the correct top view from amongst the answer figures.



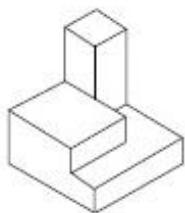
Options :



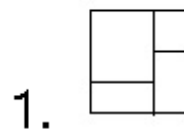
Question Number : 46 Question Type : MCQ Option Shuffling : Yes

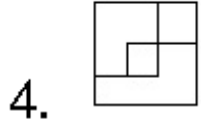
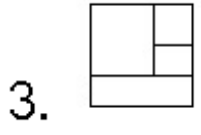
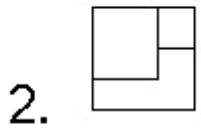
Correct Marks : 4 Wrong Marks : 1

3 - D प्रश्न आकृति में एक वस्तु के एक दृश्य को दिखाया गया है। इसका सही ऊपरी दृश्य, उत्तर आकृतियों में से पहचानिये।



Options :

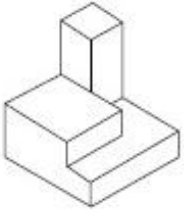




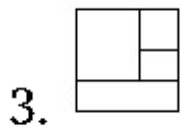
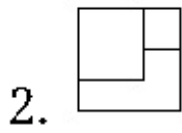
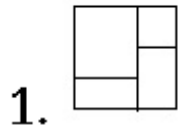
Question Number : 46 Question Type : MCQ Option Shuffling : Yes

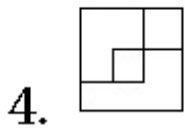
Correct Marks : 4 Wrong Marks : 1

3 - D પ્રશ્ન આકૃતિ એક વસ્તુનું દૃશ્ય બતાવે છે. આનું સાચું ઉપરી દૃશ્ય (top view) જવાબ આકૃતિઓમાંથી શોધો.



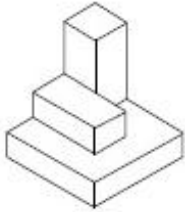
Options :



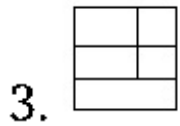
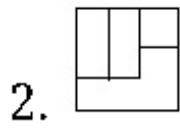
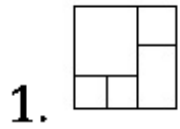


Question Number : 47 Question Type : MCQ Option Shuffling : Yes  
 Correct Marks : 4 Wrong Marks : 1

The 3 - D figure shows the view of an object. Identify the correct top view from amongst the answer figures.

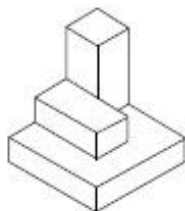


Options :



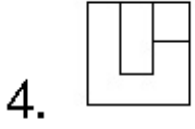
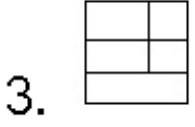
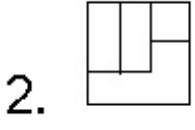
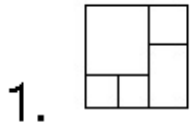
Question Number : 47 Question Type : MCQ Option Shuffling : Yes  
 Correct Marks : 4 Wrong Marks : 1

3 - D प्रश्न आकृति में एक वस्तु के एक दृश्य को दिखाया गया है। इसका सही ऊपरी दृश्य, उत्तर आकृतियों में से पहचानिये।



Options :

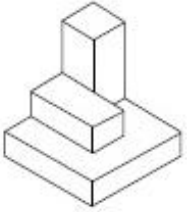




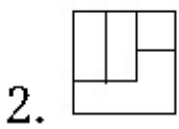
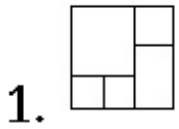
Question Number : 47 Question Type : MCQ Option Shuffling : Yes

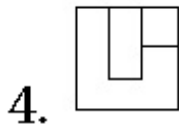
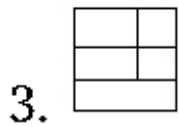
Correct Marks : 4 Wrong Marks : 1

3 - D પ્રશ્ન આકૃતિ એક વસ્તુનું દૃશ્ય બતાવે છે. આનું સાચું ઉપરી દૃશ્ય (top view) જવાબ આકૃતિઓમાંથી શોધો.



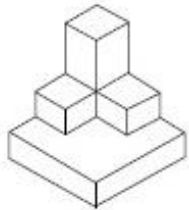
Options :



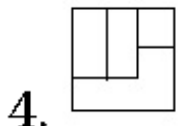
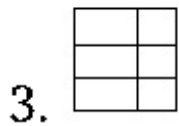
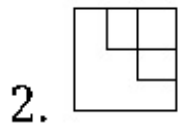
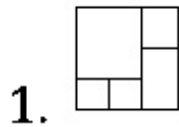


Question Number : 48 Question Type : MCQ Option Shuffling : Yes  
 Correct Marks : 4 Wrong Marks : 1

The 3 - D figure shows the view of an object. Identify the correct top view from amongst the answer figures.

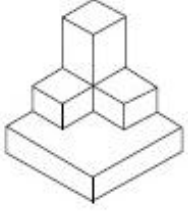


Options :

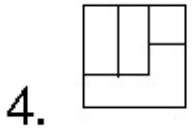
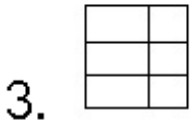
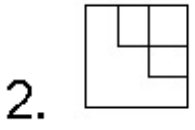
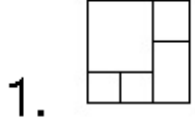


Question Number : 48 Question Type : MCQ Option Shuffling : Yes  
 Correct Marks : 4 Wrong Marks : 1

3 - D પ્રશ્ન આકૃતિ મેં એક વસ્તુ કે એક દૃશ્ય કો દિખાયા ગયા હૈ। ઇસકા સહી ઊપરી દૃશ્ય, ઉત્તર આકૃતિયોં મેં સે પહચાનિયે।



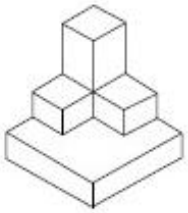
Options :



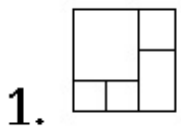
Question Number : 48 Question Type : MCQ Option Shuffling : Yes

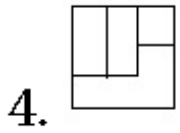
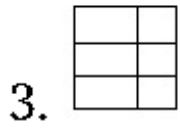
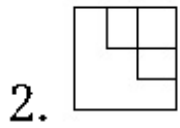
Correct Marks : 4 Wrong Marks : 1

3 - D પ્રશ્ન આકૃતિ એક વસ્તુનું દશ્ય બતાવે છે. આનું સાચું ઉપરી દશ્ય (top view) જવાબ આકૃતિઓમાંથી શોધો.



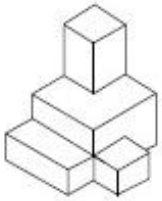
Options :



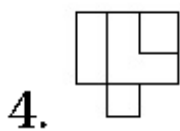
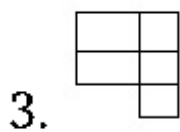
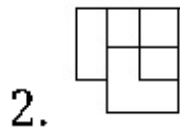
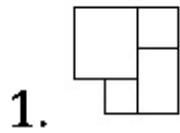


Question Number : 49 Question Type : MCQ Option Shuffling : Yes  
 Correct Marks : 4 Wrong Marks : 1

The 3 - D figure shows the view of an object. Identify the correct top view from amongst the answer figures.



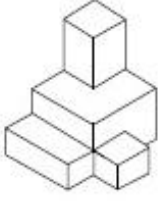
Options :



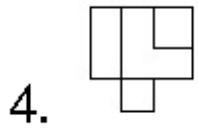
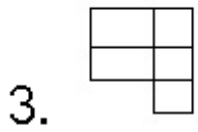
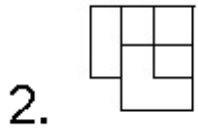
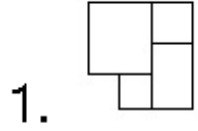
Question Number : 49 Question Type : MCQ Option Shuffling : Yes

Correct Marks : 4 Wrong Marks : 1

3 - D પ્રશ્ન આકૃતિ મેં એક વસ્તુ કે એક દૃશ્ય કો દિખાયા ગયા હૈં . ઇસકા સહી ડપરી દૃશ્ય, ડત્તર આકૃતિયોં મેં સે પહચાનિયે .



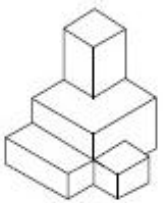
Options :



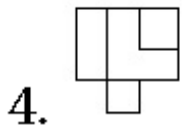
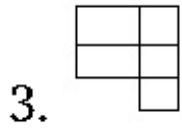
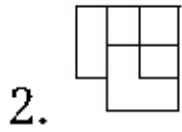
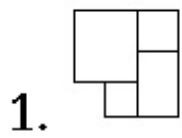
Question Number : 49 Question Type : MCQ Option Shuffling : Yes

Correct Marks : 4 Wrong Marks : 1

3 - D પ્રશ્ન આકૃતિ એક વસ્તુનું દશ્ય બતાવે છે. આનું સાચું ડપરી દશ્ય (top view) જવાબ આકૃતિઓમાંથી શોધો.



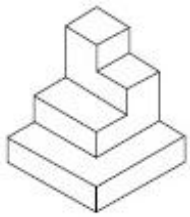
Options :



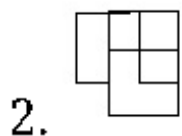
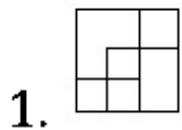
Question Number : 50 Question Type : MCQ Option Shuffling : Yes

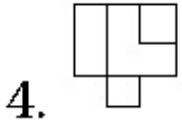
Correct Marks : 4 Wrong Marks : 1

The 3 - D figure shows the view of an object. Identify the correct top view from amongst the answer figures.



Options :

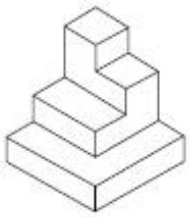




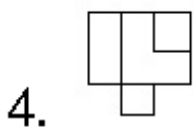
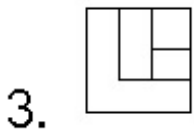
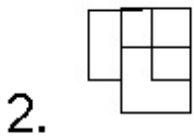
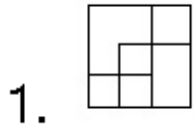
Question Number : 50 Question Type : MCQ Option Shuffling : Yes

Correct Marks : 4 Wrong Marks : 1

3 - D प्रश्न आकृति में एक वस्तु के एक दृश्य को दिखाया गया है। इसका सही ऊपरी दृश्य, उत्तर आकृतियों में से पहचानिये।



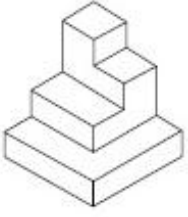
Options :



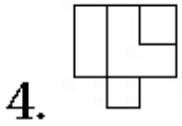
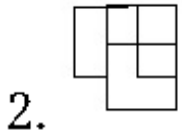
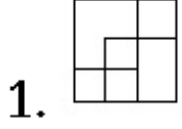
Question Number : 50 Question Type : MCQ Option Shuffling : Yes

Correct Marks : 4 Wrong Marks : 1

3 - D પ્રભ્ન આકૃતિ એક વસ્તુનું દશ્ય બતાવે છે. આનું સાચું ઉપરી દશ્ય (top view) જવાબ આકૃતિઓમાંથી શોધો.



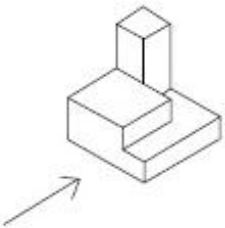
Options :



Question Number : 51 Question Type : MCQ Option Shuffling : Yes

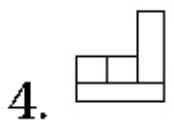
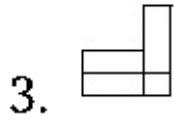
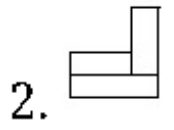
Correct Marks : 4 Wrong Marks : 1

The 3 - D figure shows the view of an object. Identify the correct view in the direction of the arrow, from amongst the answer figures.



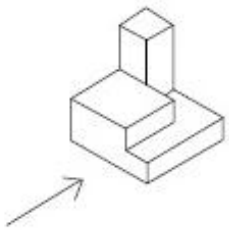
Options :




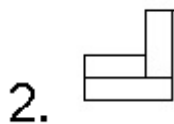
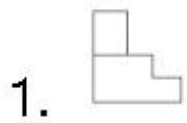


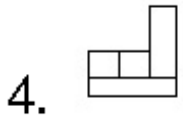
Question Number : 51 Question Type : MCQ Option Shuffling : Yes  
Correct Marks : 4 Wrong Marks : 1

3 - D प्रश्न आकृति में एक वस्तु के एक दृश्य को दिखाया गया है। तीर की दिशा में देखते हुए, इसके सम्मुख दृश्य को उत्तर आकृतियों में से पहचानिये।



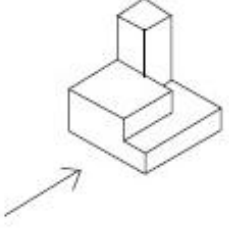
Options :



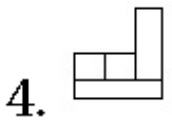
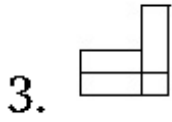
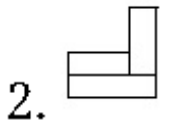
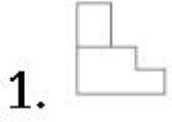


Question Number : 51 Question Type : MCQ Option Shuffling : Yes  
Correct Marks : 4 Wrong Marks : 1

3 - D પ્રશ્ન આકૃતિ એક વસ્તુનું દૃશ્ય બતાવે છે. તીરની દિશામાં જોતાં, આનું સાચું દૃશ્ય જવાબ આકૃતિઓમાંથી શોધો.

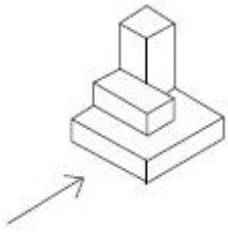


Options :

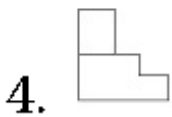
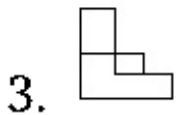
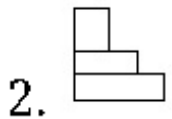
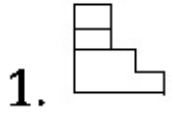


Question Number : 52 Question Type : MCQ Option Shuffling : Yes  
Correct Marks : 4 Wrong Marks : 1

The 3 - D figure shows the view of an object. Identify the correct view in the direction of the arrow, from amongst the answer figures.



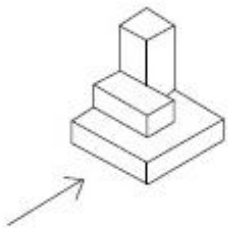
Options :



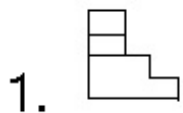
Question Number : 52 Question Type : MCQ Option Shuffling : Yes

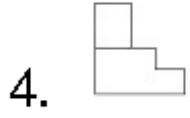
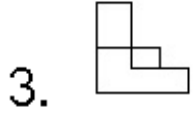
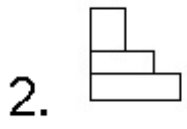
Correct Marks : 4 Wrong Marks : 1

3 - D प्रश्न आकृति में एक वस्तु के एक दृश्य को दिखाया गया है। तीर की दिशा में देखते हुए, इसके सम्मुख दृश्य को उत्तर आकृतियों में से पहचानिये।



Options :

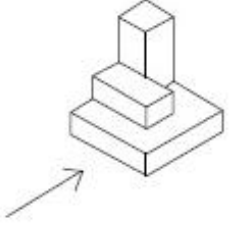




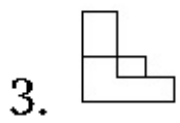
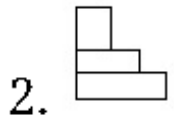
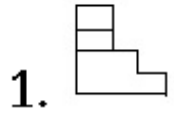
Question Number : 52 Question Type : MCQ Option Shuffling : Yes

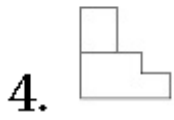
Correct Marks : 4 Wrong Marks : 1

3 - D પ્રશ્ન આકૃતિ એક વસ્તુનું દૃશ્ય બતાવે છે. ત્રીસની દિશામાં જોતાં, આનું સાચું દૃશ્ય જવાબ આકૃતિઓમાંથી શોધો.



Options :

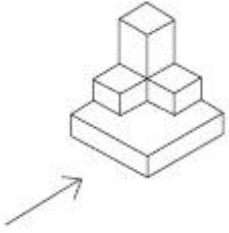




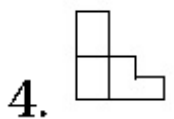
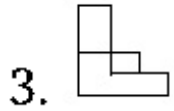
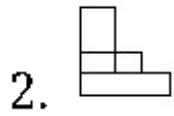
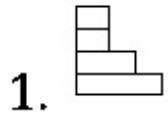
Question Number : 53 Question Type : MCQ Option Shuffling : Yes

Correct Marks : 4 Wrong Marks : 1

The 3 - D figure shows the view of an object. Identify the correct view in the direction of the arrow, from amongst the answer figures.



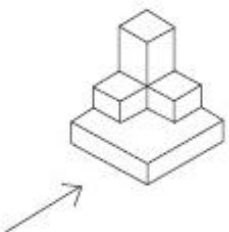
Options :



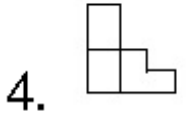
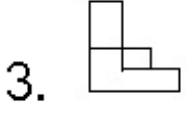
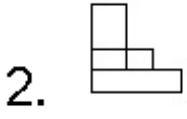
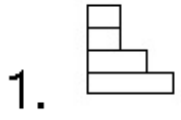
Question Number : 53 Question Type : MCQ Option Shuffling : Yes

Correct Marks : 4 Wrong Marks : 1

3 - D प्रश्न आकृति में एक वस्तु के एक दृश्य को दिखाया गया है। तीर की दिशा में देखते हुए, इसके सम्मुख दृश्य को उत्तर आकृतियों में से पहचानिये।



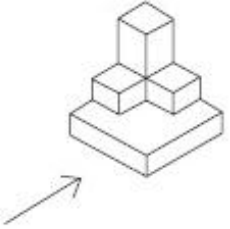
Options :



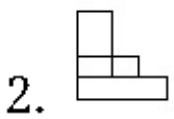
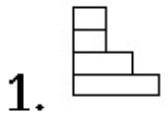
Question Number : 53 Question Type : MCQ Option Shuffling : Yes

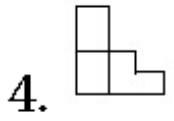
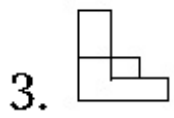
Correct Marks : 4 Wrong Marks : 1

3 - D પ્રશ્ન આકૃતિ એક વસ્તુનું દૃશ્ય બતાવે છે. ત્રીસની દિશામાં જોતાં, આનું સાચું દૃશ્ય જવાબ આકૃતિઓમાંથી શોધો.



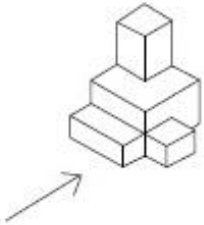
Options :



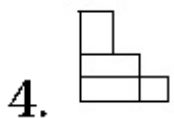
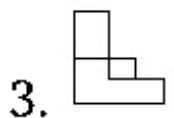
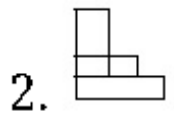
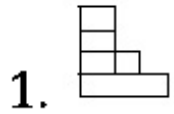


Question Number : 54 Question Type : MCQ Option Shuffling : Yes  
Correct Marks : 4 Wrong Marks : 1

The 3 - D figure shows the view of an object. Identify the correct view in the direction of the arrow, from amongst the answer figures.

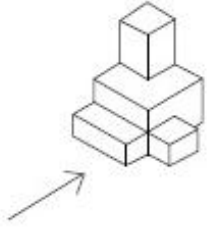


Options :

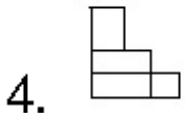
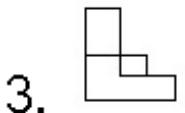
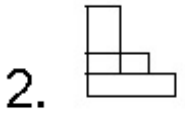
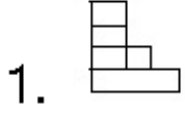


Question Number : 54 Question Type : MCQ Option Shuffling : Yes  
Correct Marks : 4 Wrong Marks : 1

3 - D प्रश्न आकृति में एक वस्तु के एक दृश्य को दिखाया गया है। तीर की दिशा में देखते हुए, इसके सम्मुख दृश्य को उत्तर आकृतियों में से पहचानिये।



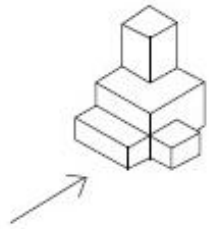
Options :



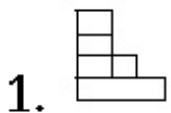
Question Number : 54 Question Type : MCQ Option Shuffling : Yes

Correct Marks : 4 Wrong Marks : 1

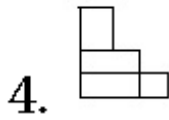
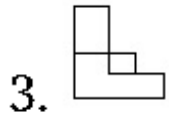
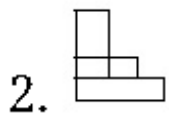
3 - D प्रश्न आकृति एक वस्तुनुं दृश्य बतावे छे. तीरनी दिशाभां जेतां, आनुं सायुं दृश्य जवाब आकृतिओभांथी शोधो.



Options :



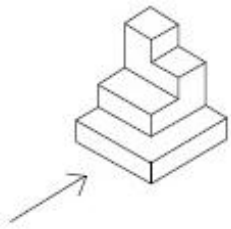




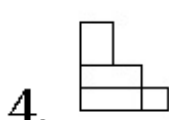
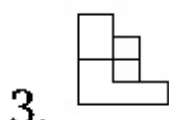
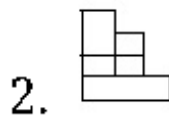
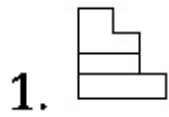
Question Number : 55 Question Type : MCQ Option Shuffling : Yes

Correct Marks : 4 Wrong Marks : 1

The 3 - D figure shows the view of an object. Identify the correct view in the direction of the arrow, from amongst the answer figures.



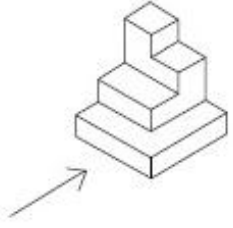
Options :



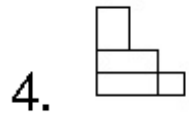
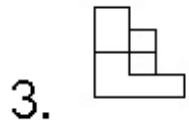
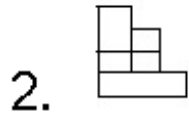
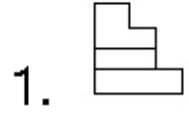
Question Number : 55 Question Type : MCQ Option Shuffling : Yes

Correct Marks : 4 Wrong Marks : 1

3 - D પ્રશ્ન આકૃતિ મેં એક વસ્તુ કે એક દૃશ્ય કો દિખાયા ગયા હૈ । તીર કી દિશા મેં દેખતે હુએ, ઇસકે સમ્મુખ દૃશ્ય કો ઉત્તર આકૃતિયોં મેં સે પહચાનિયે ।



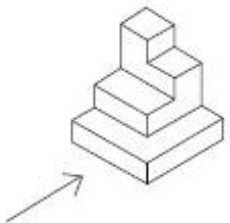
Options :



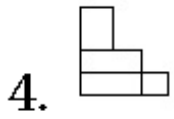
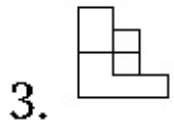
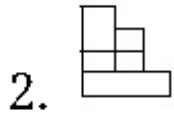
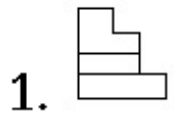
Question Number : 55 Question Type : MCQ Option Shuffling : Yes

Correct Marks : 4 Wrong Marks : 1

3 - D પ્રશ્ન આકૃતિ એક વસ્તુનું દશ્ય બતાવે છે. તીરની દિશામાં જોતાં, આનું સાચું દશ્ય જવાબ આકૃતિઓમાંથી શોધો.

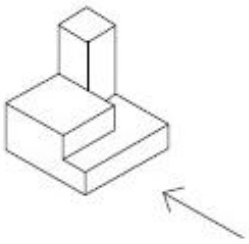


Options :

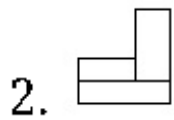
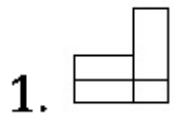


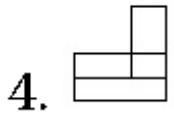
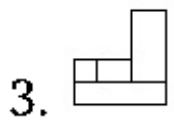
Question Number : 56 Question Type : MCQ Option Shuffling : Yes  
Correct Marks : 4 Wrong Marks : 1

The 3 - D figure shows the view of an object. Identify the correct view in the direction of the arrow, from amongst the answer figures.



Options :

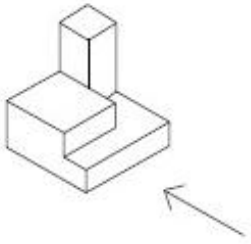




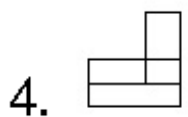
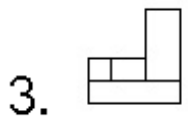
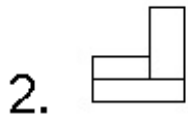
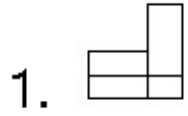
Question Number : 56 Question Type : MCQ Option Shuffling : Yes

Correct Marks : 4 Wrong Marks : 1

3 - D प्रश्न आकृति में एक वस्तु के एक दृश्य को दिखाया गया है। तीर की दिशा में देखते हुए, इसके सम्मुख दृश्य को उत्तर आकृतियों में से पहचानिये।



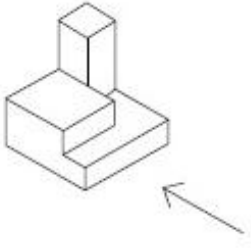
Options :



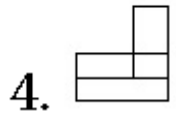
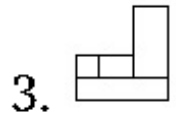
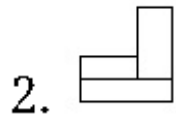
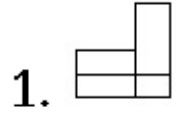
Question Number : 56 Question Type : MCQ Option Shuffling : Yes

Correct Marks : 4 Wrong Marks : 1

3 - D પ્રભ્ન આકૃતિ એક વસ્તુનું દશ્ય બતાવે છે. તીરની દિશામાં જોતાં, આનું સાચું દશ્ય જવાબ આકૃતિઓમાંથી શોધો.



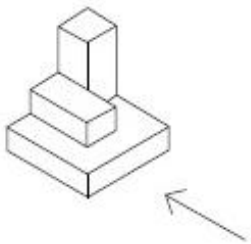
Options :



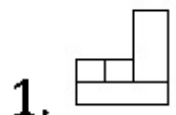
Question Number : 57 Question Type : MCQ Option Shuffling : Yes

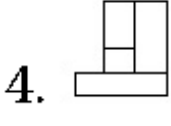
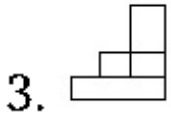
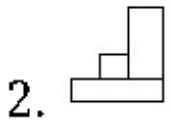
Correct Marks : 4 Wrong Marks : 1

The 3 - D figure shows the view of an object. Identify the correct view in the direction of the arrow, from amongst the answer figures.



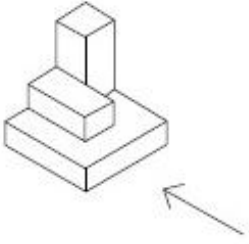
Options :



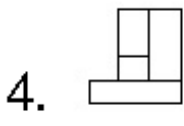
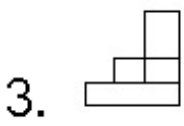
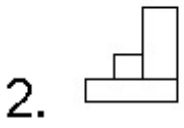
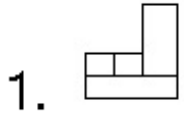


Question Number : 57 Question Type : MCQ Option Shuffling : Yes  
Correct Marks : 4 Wrong Marks : 1

3 - D प्रश्न आकृति में एक वस्तु के एक दृश्य को दिखाया गया है। तीर की दिशा में देखते हुए, इसके सम्मुख दृश्य को उत्तर आकृतियों में से पहचानिये।



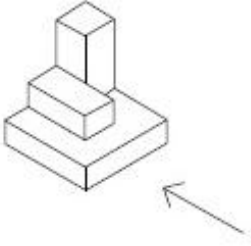
Options :



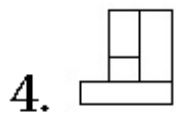
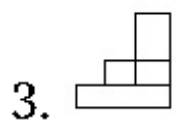
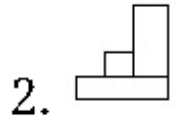
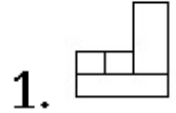
Question Number : 57 Question Type : MCQ Option Shuffling : Yes

Correct Marks : 4 Wrong Marks : 1

3 - D પ્રસ્ન આકૃતિ એક વસ્તુનું દૃશ્ય બતાવે છે. તીરની દિશામાં જોતાં, આનું સાચું દૃશ્ય જવાબ આકૃતિઓમાંથી શોધો.



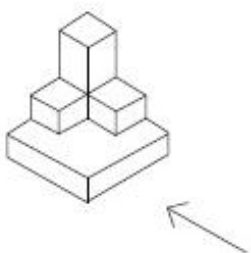
Options :



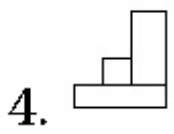
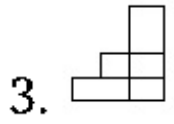
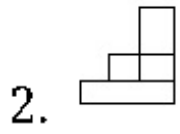
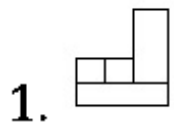
Question Number : 58 Question Type : MCQ Option Shuffling : Yes

Correct Marks : 4 Wrong Marks : 1

The 3 - D figure shows the view of an object. Identify the correct view in the direction of the arrow, from amongst the answer figures.



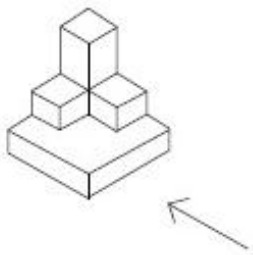
Options :



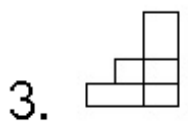
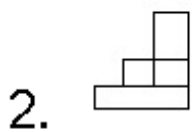
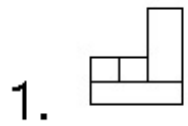
Question Number : 58 Question Type : MCQ Option Shuffling : Yes

Correct Marks : 4 Wrong Marks : 1

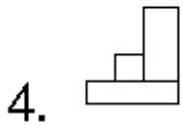
3 - D प्रश्न आकृति में एक वस्तु के एक दृश्य को दिखाया गया है। तीर की दिशा में देखते हुए, इसके सम्मुख दृश्य को उत्तर आकृतियों में से पहचानिये।



Options :



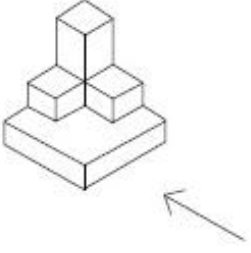




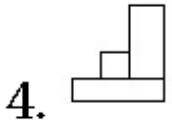
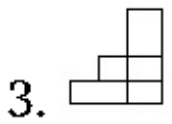
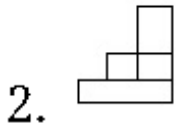
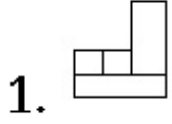
Question Number : 58 Question Type : MCQ Option Shuffling : Yes

Correct Marks : 4 Wrong Marks : 1

3 - D પ્રશ્ન આકૃતિ એક વસ્તુનું દૃશ્ય બતાવે છે. તીરની દિશામાં જોતાં, આનું સાચું દૃશ્ય જવાબ આકૃતિઓમાંથી શોધો.



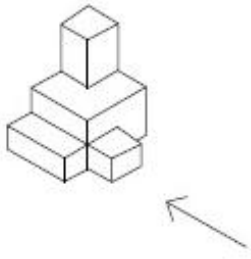
Options :



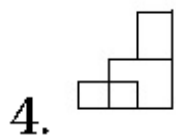
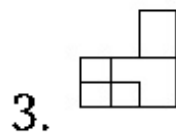
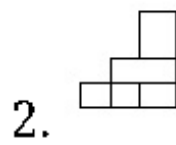
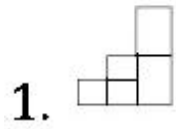
Question Number : 59 Question Type : MCQ Option Shuffling : Yes

Correct Marks : 4 Wrong Marks : 1

The 3 - D figure shows the view of an object. Identify the correct view in the direction of the arrow, from amongst the answer figures.



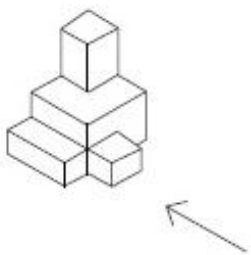
Options :



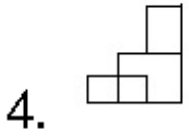
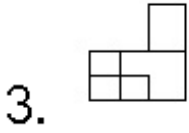
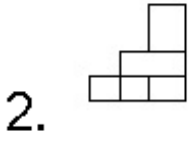
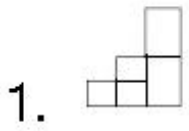
Question Number : 59 Question Type : MCQ Option Shuffling : Yes

Correct Marks : 4 Wrong Marks : 1

3 - D प्रश्न आकृति में एक वस्तु के एक दृश्य को दिखाया गया है। तीर की दिशा में देखते हुए, इसके सम्मुख दृश्य को उत्तर आकृतियों में से पहचानिये।

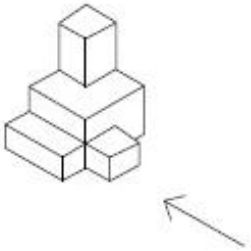


Options :

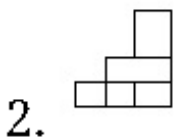
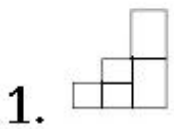


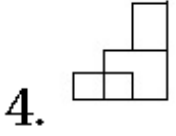
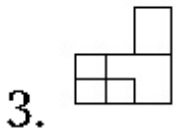
Question Number : 59 Question Type : MCQ Option Shuffling : Yes  
Correct Marks : 4 Wrong Marks : 1

3 - D પ્રશ્ન આકૃતિ એક વસ્તુનું દૃશ્ય બતાવે છે. ત્રીરની દિશામાં જોતાં, આનું સાચું દૃશ્ય જવાબ આકૃતિઓમાંથી શોધો.



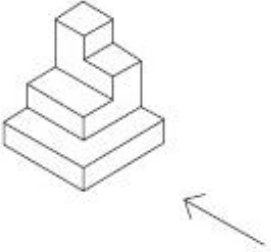
Options :



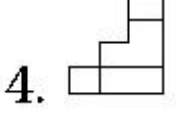
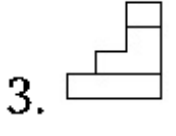
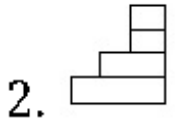
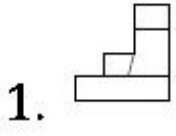


Question Number : 60 Question Type : MCQ Option Shuffling : Yes  
 Correct Marks : 4 Wrong Marks : 1

The 3 - D figure shows the view of an object. Identify the correct view in the direction of the arrow, from amongst the answer figures.

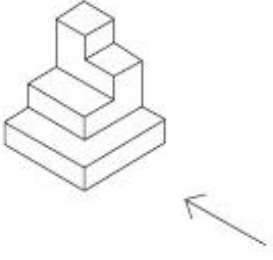


Options :

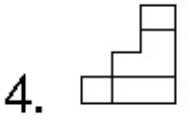
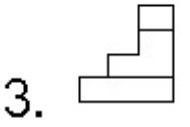
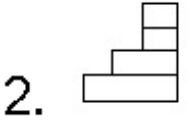
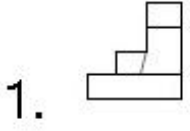


Question Number : 60 Question Type : MCQ Option Shuffling : Yes  
 Correct Marks : 4 Wrong Marks : 1

3 - D પ્રશ્ન આકૃતિ મેં એક વસ્તુ કે એક દૃશ્ય કો દિખાયા ગયા હૈ । તીર કી દિશા મેં દેખતે હુએ, ઇસકે સમ્મુખ દૃશ્ય કો ઉત્તર આકૃતિયોં મેં સે પહચાનિયે ।



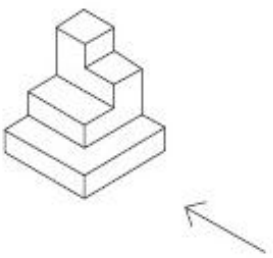
Options :



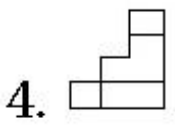
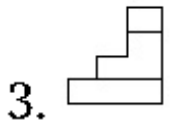
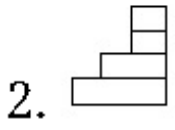
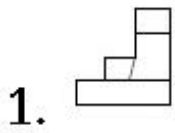
Question Number : 60 Question Type : MCQ Option Shuffling : Yes

Correct Marks : 4 Wrong Marks : 1

3 - D પ્રશ્ન આકૃતિ એક વસ્તુનું દૃશ્ય બતાવે છે. તીરની દિશામાં જોતાં, આનું સાચું દૃશ્ય જવાબ આકૃતિઓમાંથી શોધો.



Options :



Question Number : 61 Question Type : MCQ Option Shuffling : Yes

Correct Marks : 4 Wrong Marks : 1

Buckingham Palace is the Residence of which one of the following ?

Options :

1. Queen of England

2. King of Netherlands

3. King of Prussia

4. King of Nepal

Question Number : 61 Question Type : MCQ Option Shuffling : Yes

Correct Marks : 4 Wrong Marks : 1

बखिनाम पैलेस निम्नलिखित में से एक का निवास है :

Options :

1. इंग्लैंड की रानी
2. नीदरलैंड के राजा
3. प्रुशिया का राजा
4. नेपाल का राजा

Question Number : 61 Question Type : MCQ Option Shuffling : Yes  
Correct Marks : 4 Wrong Marks : 1

બર્કિંગમ મહેલ નીચેનામાંથી કોનું નિવાસસ્થાન છે?

Options :

1. ઈંગ્લેન્ડની રાણી
2. નેધરલેન્ડના રાજા
3. પ્રુશિયાના રાજા
4. નેપાળના રાજા

Question Number : 62 Question Type : MCQ Option Shuffling : Yes  
Correct Marks : 4 Wrong Marks : 1

In the Northern Hemisphere the winter sun rises from which one of the following directions ?

Options :

1. North East
2. North West
3. South East
4. South West

Question Number : 62 Question Type : MCQ Option Shuffling : Yes  
Correct Marks : 4 Wrong Marks : 1

उत्तरी गोलार्ध में सर्दियों में सूरज निम्न दिशाओं में से  
किस एक दिशा से उगता है?

Options :

1. उत्तर पूर्व
2. उत्तर पश्चिम
3. दक्षिण पूर्व
4. दक्षिण पश्चिम

Question Number : 62 Question Type : MCQ Option Shuffling : Yes  
Correct Marks : 4 Wrong Marks : 1

उत्तरी गोलार्धमा शियाणानो सूर्य नीचेनामांनी कर्छ  
दिसामांथी उगे छे?

Options :

1. उत्तर पूर्व



2. उत्तर पश्चिम

3. दक्षिण पूर्व

4. दक्षिण पश्चिम

Question Number : 63 Question Type : MCQ Option Shuffling : Yes  
Correct Marks : 4 Wrong Marks : 1

Which one of the following is a purpose for installing false ceilings ?

Options :

1. Supporting the walls

2. Making the building water proof

3. Making the space acoustically effective

4. Making the building fire proof

Question Number : 63 Question Type : MCQ Option Shuffling : Yes  
Correct Marks : 4 Wrong Marks : 1

निम्नलिखित में से कौन सी झूठी छत स्थापित करने के लिए एक उद्देश्य है ?

Options :

1. दीवारों का सहारा

2. ईमारत को जलसह बनाना

3. जगह को ध्वनि प्रभावी बनाना

4. इमारत को अग्निसह प्रभावी बनाना

Question Number : 63 Question Type : MCQ Option Shuffling : Yes  
Correct Marks : 4 Wrong Marks : 1

ખોટી છત (false ceilings) સ્થાપનનો હેતુ નીચેનામાંથી શું છે?

Options :

1. દિવાલોના ટેકા માટે

2. ઈમારતો જળરોધક (વાટરપ્રુફ) બનાવવા

3. જગ્યાને ધ્વનિ અસરકારક બનાવવા

4. ઈમારતને આગરોધક (ફાયરપ્રુફ) બનાવવા

Question Number : 64 Question Type : MCQ Option Shuffling : Yes  
Correct Marks : 4 Wrong Marks : 1

What amongst the following is the thickness of a two brick wall ?

Options :

1. 18"

2. 20"

3. 16"

4. 22"

Question Number : 64 Question Type : MCQ Option Shuffling : Yes

Correct Marks : 4 Wrong Marks : 1

निम्नलिखित में से दो ईंट की दीवार की मोटाई कितनी है?

Options :

1. 18"

2. 20"

3. 16"

4. 22"

Question Number : 64 Question Type : MCQ Option Shuffling : Yes

Correct Marks : 4 Wrong Marks : 1

બે ઈંટની દિવાલની જડાઈ નીચેનામાંથી શું છે?

Options :

1. 18"

2. 20"

3. 16"

4. 22"

Question Number : 65 Question Type : MCQ Option Shuffling : Yes

Correct Marks : 4 Wrong Marks : 1

Where from among the following is the famous St. Peters located ?

Options :

1. Denmark

2. Norway

3. Rome

4. Venice

Question Number : 65 Question Type : MCQ Option Shuffling : Yes

Correct Marks : 4 Wrong Marks : 1

निम्नलिखित में से प्रसिद्ध सेंट पीटर्स कहाँ स्थित है ?

Options :

1. डेनमार्क

2. नॉर्वे

3. रोम

4. वेनिस

Question Number : 65 Question Type : MCQ Option Shuffling : Yes

Correct Marks : 4 Wrong Marks : 1

प्रख्यात सेंट पीटर्स नीचेनामांथी कई जग्याअे आवेलुं छे ?

Options :

1. डेनमार्क

2. नोर्वे

3. रोम

4. वेनिस

Question Number : 66 Question Type : MCQ Option Shuffling : Yes  
Correct Marks : 4 Wrong Marks : 1

In which State in India are the large Tea  
Gardens located ?

Options :

1. Punjab

2. Uttar Pradesh

3. Kerala

4. Odisha

Question Number : 66 Question Type : MCQ Option Shuffling : Yes  
Correct Marks : 4 Wrong Marks : 1

भारत के कौन से राज्य में बड़े चाय बागान स्थित हैं ?

Options :

1. पंजाब

2. उत्तर प्रदेश

3. केरल

4. ओडिशा

Question Number : 66 Question Type : MCQ Option Shuffling : Yes

Correct Marks : 4 Wrong Marks : 1

भारतमां कया राज्यमां या ना मोटा बगीचाओ आवेला छे?

Options :

1. पंजाब

2. उत्तर प्रदेश

3. केरल

4. ओडिशा

Question Number : 67 Question Type : MCQ Option Shuffling : Yes

Correct Marks : 4 Wrong Marks : 1

Where from the following is the National Gallery of Modern Art located ?

Options :

1. Bangalore

2. Lucknow

3. New Delhi

4. Mysore

Question Number : 67 Question Type : MCQ Option Shuffling : Yes

Correct Marks : 4 Wrong Marks : 1

निम्नलिखित से कहाँ आधुनिक कला की राष्ट्रीय गैलरी स्थित है ?

Options :

1. बैंगलोर

2. लखनऊ

3. नई दिल्ली

4. मैसूर

Question Number : 67 Question Type : MCQ Option Shuffling : Yes

Correct Marks : 4 Wrong Marks : 1

आधुनिक कला (Modern Art) की राष्ट्रीय गैलरी (National Gallery) नीचेनामांनी कर्छ बज्याये आवेली छे ?

Options :

1. बैंगलोर

2. लखनऊ

3. नवी दिल्ली

4. भैसूर

Question Number : 68 Question Type : MCQ Option Shuffling : Yes  
Correct Marks : 4 Wrong Marks : 1

Which one of the following is a secondary color ?

Options :

1. Green

2. Red

3. Yellow

4. Blue

Question Number : 68 Question Type : MCQ Option Shuffling : Yes  
Correct Marks : 4 Wrong Marks : 1

निम्न में से कौन सा माध्यमिक रंग है ?

Options :

1. हरा

2. लाल

3. पीला



4. नीला

Question Number : 68 Question Type : MCQ Option Shuffling : Yes

Correct Marks : 4 Wrong Marks : 1

नीचेनामानो क्यो रंग अेक गौश रंग छे ?

Options :

1. लीलो

2. लाल

3. पीलो

4. बादणी

Question Number : 69 Question Type : MCQ Option Shuffling : Yes

Correct Marks : 4 Wrong Marks : 1

Which one of the following is considered to be a calming color ?

Options :

1. Red

2. Orange

3. Green

4. Blue

Note: For this question, ambiguity is found in question/answer. Candidate will get full marks for this question if any of the correct options are chosen.

Question Number : 69 Question Type : MCQ Option Shuffling : Yes

Correct Marks : 4 Wrong Marks : 1

निम्न में से कौन सा रंग शांत माना जाता है?

Options :

1. लाल

2. नारंगी

3. हरा

4. नीला

Note: For this question, ambiguity is found in question/answer. Candidate will get full marks for this question if any of the correct options are chosen.

Question Number : 69 Question Type : MCQ Option Shuffling : Yes

Correct Marks : 4 Wrong Marks : 1

નીચેનામાંનો કયો રંગ એક શાંત રંગ માનવામાં આવે છે?

Options :

1. લાલ

2. નારંગી

3. લીલો

4. ભૂરો

Note: For this question, ambiguity is found in question/answer. Candidate will get full marks for this question if any of the correct options are chosen.

Question Number : 70 Question Type : MCQ Option Shuffling : Yes

Correct Marks : 4 Wrong Marks : 1

What is the texture of sand-paper ?

Options :

1. Coarse
2. Glossy
3. Smooth
4. Shiny

Question Number : 70 Question Type : MCQ Option Shuffling : Yes

Correct Marks : 4 Wrong Marks : 1

रेतमार की बनावट कैसी होती है?

Options :

1. ऊबड़खाबड़
2. चमचमाती
3. चिकना
4. चमकदार

Question Number : 70 Question Type : MCQ Option Shuffling : Yes

Correct Marks : 4 Wrong Marks : 1

सेन्ड पेपर (sand paper) नुं टेक्स्चर (texture) शुं छे?

Options :

1. भरभर्युं

2. थमकदार

3. लीसुं

4. अणकुं

Question Number : 71 Question Type : MCQ Option Shuffling : Yes  
Correct Marks : 4 Wrong Marks : 1

What is the purpose of a chimney in a building ?

Options :

1. To give strength to a building

2. To hold the building up

3. To take out the smoke from a fire place

4. To make the building water proof

Question Number : 71 Question Type : MCQ Option Shuffling : Yes  
Correct Marks : 4 Wrong Marks : 1

एक इमारत में चिमनी का उद्देश्य क्या है ?

Options :

1. एक इमारत को ताकत देने के लिए

2. भवन को सहारा देने के लिए

3. आग वाली जगह से धुआं निकलने के लिए

4. बिल्डिंग को जलसह बनाने के लिए

Question Number : 71 Question Type : MCQ Option Shuffling : Yes  
Correct Marks : 4 Wrong Marks : 1

ઈમ્મારતમાં ધુમાડિયા (chimney) નો હેતુ શું છે?

Options :

1. ઈમ્મારતને મજબૂત બનાવવા માટે

2. ઈમ્મારતની પકડ માટે

3. આગવાળી જગ્યાથી ધુમાડો બહાર કાઢવા માટે

4. ઈમ્મારતને જળરોધક (વાટરપ્રૂફ) બનાવવા માટે

Question Number : 72 Question Type : MCQ Option Shuffling : Yes  
Correct Marks : 4 Wrong Marks : 1

What among the following would be the ideal material for flooring of a steel factory ?

Options :

1. Wood

2. Tiles

3. Granite

## 4. Steel

Question Number : 72 Question Type : MCQ Option Shuffling : Yes  
Correct Marks : 4 Wrong Marks : 1

निम्नलिखित में से क्या एक इस्पात कारखाने के फर्श के लिए आदर्श सामग्री होगी ?

Options :

1. लकड़ी
2. टाइल्स
3. ग्रेनाइट
4. स्टील

Question Number : 72 Question Type : MCQ Option Shuffling : Yes  
Correct Marks : 4 Wrong Marks : 1

स्टील इन्फ़ेक्टरीना भोजतणिया माटे नीचेनामांथी क्यो पदार्थ आदर्श छे ?

Options :

1. लकड़ु
2. लकड़ी (टाइल्स)
3. ग्रेनाइट

4. स्टील

Question Number : 73 Question Type : MCQ Option Shuffling : Yes

Correct Marks : 4 Wrong Marks : 1

Who was the architect of the LIC Building in Connaught Place, New Delhi ?

Options :

1. Raj Rewal

2. Charles Correa

3. Louis Kahn

4. Zaha Hadid

Question Number : 73 Question Type : MCQ Option Shuffling : Yes

Correct Marks : 4 Wrong Marks : 1

कनॉट प्लेस, नई दिल्ली में एल.आई.सी. बिल्डिंग का वास्तुकार कौन था ?

Options :

1. राज रेवाल

2. चार्ल्स कोरिया

3. लुईस काह्न

4. जहा हदीद

Question Number : 73 Question Type : MCQ Option Shuffling : Yes

Correct Marks : 4 Wrong Marks : 1

कोनोट प्लेस, नवी दिल्ली स्थित अेल. आर्छ. सी. बिल्डींगना वास्तुकार (स्थपति) कोणु हतु?

Options :

1. राज रेवाल

2. आर्ल्स कोरिया

3. लुईस कालन

4. अल हदीद

Question Number : 74 Question Type : MCQ Option Shuffling : Yes

Correct Marks : 4 Wrong Marks : 1

Who was the architect of the glass pyramid at the Louvre Paris ?

Options :

1. Frank Lloyd Wright

2. Walter Gropius

3. I.M. Pei

4. Charles Correa

Question Number : 74 Question Type : MCQ Option Shuffling : Yes

Correct Marks : 4 Wrong Marks : 1

कौन लूव्र पेरिस में ग्लास पिरामिड के वास्तुकार थे ?

Options :



1. फ्रैंक लॉयड राइट
2. वाल्टर ग्रोपियस
3. आई.एम. पेई
4. चार्ल्स कोरिया

Question Number : 74 Question Type : MCQ Option Shuffling : Yes  
Correct Marks : 4 Wrong Marks : 1

सूवर पेरिस स्थित कायना पिरामिडना वास्तुकार (स्थपति)  
कोशु हता?

Options :

1. इन्ड लोर्डस राईट
2. वोल्टर ग्रोपीयस
3. आई.एम. पेई
4. चार्ल्स कोरिया

Question Number : 75 Question Type : MCQ Option Shuffling : Yes  
Correct Marks : 4 Wrong Marks : 1

Who amongst the following is an  
architect ?

Options :

1. Geoffery Bawa
2. Sharmila Tagore
3. Louis Armstrong
4. Donald Trump

Question Number : 75 Question Type : MCQ Option Shuffling : Yes  
Correct Marks : 4 Wrong Marks : 1

निम्न में से कौन एक वास्तुकार है?

Options :

1. जेओफ्री बावा
2. शर्मिला टैगोर
3. लुइस आर्मस्ट्रांग
4. डोनाल्ड ट्रम्प

Question Number : 75 Question Type : MCQ Option Shuffling : Yes  
Correct Marks : 4 Wrong Marks : 1

नीचेनामांथी कोण, अेक वास्तुकार (स्थपति) छे?

Options :

1. जेइरी बावा

2. शर्मिला टागोर

3. लुईस आर्मस्ट्रॉंग

4. डोनाल्ड ट्रम्प

## Planning

Section Id :	40503622
Section Number :	3
Section type :	Online
Mandatory or Optional:	Mandatory
Number of Questions:	25
Number of Questions to be attempted:	25
Section Marks:	100

Sub-Section Number:	1
Sub-Section Id:	40503631
Question Shuffling Allowed :	Yes

Question Number : 76 Question Type : MCQ Option Shuffling : Yes

Correct Marks : 4 Wrong Marks : 1

A system of economic enterprise based on market exchange is termed as :

Options :

1. Socialism

2. Communism

3. Capitalism

4. Feudalism

Question Number : 76 Question Type : MCQ Option Shuffling : Yes

Correct Marks : 4 Wrong Marks : 1

बाजार विनिमय (market exchange) पर आधारित  
आर्थिक उद्यम की एक प्रणाली को कहा जाता है :

Options :

1. समाजवाद
2. सांप्रदायिकता
3. पूँजीवाद
4. सामंतवाद

Question Number : 76 Question Type : MCQ Option Shuffling : Yes

Correct Marks : 4 Wrong Marks : 1

બજાર વિનિમય ઉપર આધારિત આર્થિક સાહસની એક  
પ્રણાલી નીચેનામાંથી એક તરીકે ઓળખાય છે.

Options :

1. સમાજવાદ
2. સામ્યવાદ
3. મૂડીવાદ
4. સામંતવાદ

Question Number : 77 Question Type : MCQ Option Shuffling : Yes

Correct Marks : 4 Wrong Marks : 1

Which is the First Airport in India ?

Options :

1. Safdarjung Airport
2. Juhu Aerodrome
3. Kolkata Airport
4. Madras Airport

Question Number : 77 Question Type : MCQ Option Shuffling : Yes

Correct Marks : 4 Wrong Marks : 1

भारत में पहला हवाई अड्डा कौन सा है ?

Options :

1. सफदरजंग हवाई अड्डा
2. जुहू हवाई अड्डा
3. कोलकाता हवाई अड्डा
4. मद्रास हवाई अड्डा

Question Number : 77 Question Type : MCQ Option Shuffling : Yes

Correct Marks : 4 Wrong Marks : 1

ભારતમાં પ્રથમ હવાઈ અડ્ડા (એરપોર્ટ) કયું છે ?

Options :

1. સફદરજંગ હવાઈ અડ્ડા

2. જૂહુ ઁરોડ્રોમ

3. કોલકત્તા હવોઈ ઁહુ

4. મદ્રાસ હવોઈ ઁહુ

Question Number : 78 Question Type : MCQ Option Shuffling : Yes  
Correct Marks : 4 Wrong Marks : 1

Which of these does not hold true for the following observation ?

Evidences of town planning principles in Indus Valley Civilisation is demonstrated through the discovery of the following :

Options :

1. Houses were connected directly to a drainage system

2. Public transport wagons moved in the cities

3. Great Bath that served the purpose of community bathing

4. Some of the towns were laid out in a grid pattern

Question Number : 78 Question Type : MCQ Option Shuffling : Yes  
Correct Marks : 4 Wrong Marks : 1

નિમ્ન ટિપ્પણી (observation) કે લિલે કોન સો સત્ય નહીં હૈ?

સિંધુ ઘોટી સમ્યતો મેં નગર નિયોજન સિદ્ધાંતોં કો સોક્ષ્ય નિમ્ન કે પતો લગને સે પ્રમાણિત હોતો હૈ :

Options :

1. घरों को सीधे अपवहन तंत्र (drainage system) से जोड़ा गया था।
2. सार्वजनिक परिवहन वैगन शहरों में चलने लगी।
3. ग्रेट बाथ (Great Bath) जिसने सामुदायिक स्नान के उद्देश्य का काम किया।
4. कुछ शहरों को ग्रिड पैटर्न में बनाया गया।

Question Number : 78 Question Type : MCQ Option Shuffling : Yes  
Correct Marks : 4 Wrong Marks : 1

नीचे आपेला अवलोकन माटे कुं सायुं नथी?

छन्दस् भीष्म संस्कृतिमां नगर आयोजन सिध्दांत ना पूरावाओ नीचे आपेली शोध वडे दर्शावेल छे.

Options :

1. घरों सीधा न गटर व्यवस्था साथे जोडावेल हतां.
2. शहरोमां नहर परिवहन वेगन नसेड्युं हतुं.
3. ग्रेट बाथ अ समुदाय स्नान नो हेतु सिध्द कर्यो.
4. केटलोक शहरोने नणी आकार (grid pattern) स्वडूपे भीष्मवा.

Question Number : 79 Question Type : MCQ Option Shuffling : Yes  
Correct Marks : 4 Wrong Marks : 1

Which one of the following is not a fundamental right as per Constitution of India ?

Options :

1. Right to Equality
2. Right to Education
3. Right to Freedom of Speech
4. Right to Property

Question Number : 79 Question Type : MCQ Option Shuffling : Yes

Correct Marks : 4 Wrong Marks : 1

भारतीय संविधान के अनुसार निम्न में से कौन सा एक मौलिक अधिकार नहीं है ?

Options :

1. समानता का अधिकार
2. शिक्षा का अधिकार
3. अभिव्यक्ति की स्वतंत्रता का अधिकार
4. संपत्ति का अधिकार

Question Number : 79 Question Type : MCQ Option Shuffling : Yes

Correct Marks : 4 Wrong Marks : 1

नीचे आपेलाभांथी क्युं अेक भारतना अंधारण प्रमाणे भूणभूत हक नथी ?

Options :



1. समानता नो अधिकार

2. शिक्षणनो अधिकार

3. वाणी (अभिव्यक्तिनो) स्वतंत्र नो अधिकार

4. भिलकत नो अधिकार

Question Number : 80 Question Type : MCQ Option Shuffling : Yes  
Correct Marks : 4 Wrong Marks : 1

Which of the following has the maximum slope ?

Options :

1. 1 : 20

2. 1 : 30

3. 1 : 15

4. 1 : 10

Question Number : 80 Question Type : MCQ Option Shuffling : Yes  
Correct Marks : 4 Wrong Marks : 1

निम्न में से किसकी ढाल अधिकतम है ?

Options :

1. 1 : 20

2. 1:30

3. 1:15

4. 1:10

Question Number : 80 Question Type : MCQ Option Shuffling : Yes  
Correct Marks : 4 Wrong Marks : 1

નીચે આપેલામાંથી કયો એક મહત્તમ ઢાળ છે?

Options :

1. 1:20

2. 1:30

3. 1:15

4. 1:10

Question Number : 81 Question Type : MCQ Option Shuffling : Yes  
Correct Marks : 4 Wrong Marks : 1

Which of the following Ministers has never held the portfolio of Urban Development ?

Options :

1. Hardeep Singh Puri

2. Venkaiah Naidu

3. Jaipal Reddy

4. Jairam Ramesh

Question Number : 81 Question Type : MCQ Option Shuffling : Yes

Correct Marks : 4 Wrong Marks : 1

निम्न मंत्रियों में से किसके पास शहरी विकास का विभाग (portfolio) कभी नहीं था ?

Options :

1. हरदीप सिंह पुरी

2. वेंकैया नायडू

3. जयपाल रेड्डी

4. जयराम रमेश

Question Number : 81 Question Type : MCQ Option Shuffling : Yes

Correct Marks : 4 Wrong Marks : 1

नीचे आपेलाभांथी क्वा प्रधाने शहरी विकास नो ल्वालो (पोर्टफोलियो) क्वायेय संभाष्यो नथी ?

Options :

1. हरदीप सिंह पुरी

2. वेंकैया नायडू

3. जयपाल रेड्डी

4. जयशम रमेश

Question Number : 82 Question Type : MCQ Option Shuffling : Yes

Correct Marks : 4 Wrong Marks : 1

What is the full form of GPS ?

Options :

1. Green Peace Society
2. Global Positioning System
3. Global Peace and Security
4. Global Position on Security

Question Number : 82 Question Type : MCQ Option Shuffling : Yes

Correct Marks : 4 Wrong Marks : 1

GPS का पूरा नाम (full form) क्या है ?

Options :

1. Green Peace Society
2. Global Positioning System
3. Global Peace and Security
4. Global Position on Security

Question Number : 82 Question Type : MCQ Option Shuffling : Yes

Correct Marks : 4 Wrong Marks : 1

GPS નું આખું નામ શું છે?

Options :

1. Green Peace Society
2. Global Positioning System
3. Global Peace and Security
4. Global Position on Security

Question Number : 83 Question Type : MCQ Option Shuffling : Yes

Correct Marks : 4 Wrong Marks : 1

When was the first United Nations Conference on 'Human Settlements Habitat I' held ?

Options :

1. 1981
2. 1976
3. 1970
4. 1971

Question Number : 83 Question Type : MCQ Option Shuffling : Yes

Correct Marks : 4 Wrong Marks : 1

'હ્યુમન સેટલમેન્ટ્સ હૅબિટેટ્ I' પર પહલા સંયુક્ત રાષ્ટ્ર સમ્મેલન કવ આયોજિત કિયા ગયા થા ?

Options :

1. 1981

2. 1976

3. 1970

4. 1971

Question Number : 83 Question Type : MCQ Option Shuffling : Yes  
Correct Marks : 4 Wrong Marks : 1

मानव वसाहतोनो वसवाट I उपर प्रथम संयुक्त राष्ट्र  
संभलेन क्यारे योजयेल હતું?

Options :

1. 1981

2. 1976

3. 1970

4. 1971

Question Number : 84 Question Type : MCQ Option Shuffling : Yes  
Correct Marks : 4 Wrong Marks : 1

The headquarters of International Labour  
Organisation (ILO) is located in which  
city ?

Options :

1. New York
2. Vienna
3. Washington DC
4. Geneva

Question Number : 84 Question Type : MCQ Option Shuffling : Yes  
Correct Marks : 4 Wrong Marks : 1

अंतर्राष्ट्रीय श्रम संगठन (ILO) का मुख्यालय किस शहर  
में स्थित है?

Options :

1. न्यूयॉर्क
2. वियना
3. वाशिंगटन डी.सी.
4. जिनेवा

Question Number : 84 Question Type : MCQ Option Shuffling : Yes  
Correct Marks : 4 Wrong Marks : 1

आंतरराष्ट्रीय श्रमिक संस्था (ILO) नुं मुख्य मथक नीचे  
आपेला क्या शहरेमां स्थित छे?

Options :

1. न्यूयॉर्क

2. वियेना

3. वीशिंग्टन DC

4. ब्रिनिवा

Question Number : 85 Question Type : MCQ Option Shuffling : Yes  
Correct Marks : 4 Wrong Marks : 1

Topographical map of an area is used to understand :

Options :

1. Landform

2. Population Density

3. Economic Activity

4. Climate

Question Number : 85 Question Type : MCQ Option Shuffling : Yes  
Correct Marks : 4 Wrong Marks : 1

किसी क्षेत्र के स्थलाकृतिक (Topographical) नक्शे को क्या समझने के लिए उपयोग किया जाता है?

Options :

1. भू-आकृति

2. जनसंख्या का घनत्व



3. आर्थिक गतिविधि

4. जलवायु

Question Number : 85 Question Type : MCQ Option Shuffling : Yes  
Correct Marks : 4 Wrong Marks : 1

એક વિસ્તાર નો ટોપોગ્રાફીકસ (સ્થલાકૃતિક) નક્શો શું સમજવા માટે ઉપયોગ થાય છે?

Options :

1. લેન્ડફોર્મ (ભૂ-આકૃતિ)

2. વસ્તીગીચતા

3. આર્થિક પ્રવૃત્તિ

4. વાતાવરણ

Question Number : 86 Question Type : MCQ Option Shuffling : Yes  
Correct Marks : 4 Wrong Marks : 1

With what amongst the given option is 'The White Revolution' in India associated ?

Options :

1. Rise in rice production

2. Cooperatives of milk producers

3. Cooperatives of paper mill workers

4. Rise in use of white marbles in buildings

Question Number : 86 Question Type : MCQ Option Shuffling : Yes

Correct Marks : 4 Wrong Marks : 1

भारत में 'श्वेत क्रांति', दिए गए विकल्पों में से किससे सम्बद्धित है?

Options :

1. चावल के उत्पादन में वृद्धि
2. दुग्ध उत्पादकों की सहकारी समितियाँ
3. पेपर मिल कर्मचारियों की सहकारी समितियाँ
4. भवनों में सफेद संगमरमर के इस्तेमाल में वृद्धि

Question Number : 86 Question Type : MCQ Option Shuffling : Yes

Correct Marks : 4 Wrong Marks : 1

भारत में 'सफ़ेद क्रांति' साथे नीचे आपेला विकल्पोमांथी शुं संकणायेल छे?

Options :

1. थोभाना उत्पादनमां वधारे
2. दूध उत्पादकेनी सहकारी मंडणी
3. कागज मिल कामदारोनी सहकारी मंडणी



ટકાઉ વિકાસ કાળજી રાખે છે વર્તમાન અને :

Options :

1. સમુદાય

2. ભૂતકાળ

3. વસ્તી

4. ભવિષ્ય

Question Number : 88 Question Type : MCQ Option Shuffling : Yes

Correct Marks : 4 Wrong Marks : 1

The Eastern coast of India is also known as :

Options :

1. Bay of Bengal

2. Coromondal Coast

3. Konkan Coast

4. Bengal Coast

Question Number : 88 Question Type : MCQ Option Shuffling : Yes

Correct Marks : 4 Wrong Marks : 1

ભારત કા પૂર્વ તટ ઇસ નામ સે ખી જાના જાતા હૈ :

Options :

1. બંગાલ કી ઁાડી

2. कोरोमंडल तट

3. कोंकण तट

4. बंगाल तट

Question Number : 88 Question Type : MCQ Option Shuffling : Yes  
Correct Marks : 4 Wrong Marks : 1

भारतનો पूर्विय कंडो नीचेनामांथी अेक तरकि जाइतीतो  
छे.

Options :

1. बंगालनी जाडी

2. कोरोमंडल कंडो

3. कोंकण कंडो

4. बंगाल कंडो

Question Number : 89 Question Type : MCQ Option Shuffling : Yes  
Correct Marks : 4 Wrong Marks : 1

Secondary sector economic activity is  
related to :

Options :

1. Trade and commerce

2. Agriculture

3. Industrial

4. Tourism

Question Number : 89 Question Type : MCQ Option Shuffling : Yes

Correct Marks : 4 Wrong Marks : 1

द्वितीयक क्षेत्र (Secondary sector) आर्थिक गतिविधि से संबंधित है :

Options :

1. व्यापार एवं वाणिज्य

2. कृषि

3. औद्योगिक

4. पर्यटन

Question Number : 89 Question Type : MCQ Option Shuffling : Yes

Correct Marks : 4 Wrong Marks : 1

गौण क्षेत्र (द्वितीयक क्षेत्र) आर्थिक प्रवृत्ति से नीचेनामांथी संबंधित छै :

Options :

1. वेपार अने वाणिज्य

2. कृषि

3. औद्योगिक

#### 4. प्रवासन (पर्यटन)

Question Number : 90 Question Type : MCQ Option Shuffling : Yes  
Correct Marks : 4 Wrong Marks : 1

Which was the most polluted city in India in 2018 as per Central Pollution Control Board ?

Options :

1. Lucknow

2. Ahmedabad

3. Gurugram

4. Patna

Question Number : 90 Question Type : MCQ Option Shuffling : Yes  
Correct Marks : 4 Wrong Marks : 1

केन्द्रीय प्रदूषण नियंत्रण बोर्ड के अनुसार भारत में 2018 में सबसे अधिक प्रदूषित शहर कौन सा था ?

Options :

1. लखनऊ

2. अहमदाबाद

3. गुरुग्राम

4. पटना

Question Number : 90 Question Type : MCQ Option Shuffling : Yes

Correct Marks : 4 Wrong Marks : 1

કેન્દ્રીય પ્રદૂષણ નિયંત્રણ નિગમ પ્રમાણે 2018 માં ભારતમાં સૌથી વધુ પ્રદૂષિત શહેર કયું હતું?

Options :

1. લખનૌ

2. અમદાવાદ

3. ગુરુગ્રામ (Gurugram)

4. પટના

Question Number : 91 Question Type : MCQ Option Shuffling : Yes

Correct Marks : 4 Wrong Marks : 1

Find the correct match :

- |                 |                    |
|-----------------|--------------------|
| (P) Aligarh     | (I) Silk Sarees    |
| (Q) Firozabad   | (II) Brass product |
| (R) Kanjeevaram | (III) Bangles      |
| (S) Moradabad   | (IV) Locks         |

Options :

1. (P)-(I), (Q)-(III), (R)-(II), (S)-(IV)

2. (P)-(IV), (Q)-(III), (R)-(I), (S)-(II)

3. (P)-(II), (Q)-(IV), (R)-(I), (S)-(III)

4. (P)-(III), (Q)-(I), (R)-(IV), (S)-(II)

Question Number : 91 Question Type : MCQ Option Shuffling : Yes



Correct Marks : 4 Wrong Marks : 1

सही मिलान कीजिए :

- |               |                      |
|---------------|----------------------|
| (P) अलीगढ़    | (I) रेशम की साड़ियाँ |
| (Q) फिरोजाबाद | (II) पीतल के उत्पाद  |
| (R) कांजीवरम  | (III) चूड़ियाँ       |
| (S) मुरादाबाद | (IV) ताले            |

Options :

1. (P)-(I), (Q)-(III), (R)-(II), (S)-(IV)

2. (P)-(IV), (Q)-(III), (R)-(I), (S)-(II)

3. (P)-(II), (Q)-(IV), (R)-(I), (S)-(III)

4. (P)-(III), (Q)-(I), (R)-(IV), (S)-(II)

Question Number : 91 Question Type : MCQ Option Shuffling : Yes

Correct Marks : 4 Wrong Marks : 1

साथी जेडी शोधो :

- |                          |                     |
|--------------------------|---------------------|
| (P) अलीगढ़               | (I) सिल्क साडी      |
| (Q) फिरोजाबाद            | (II) पित्तल उत्पादन |
| (R) कांजीवरम             | (III) अंगडीओ        |
| (S) मोरादाबाद(भुरादाबाद) | (IV) ताणाओ          |

Options :

1. (P)-(I), (Q)-(III), (R)-(II), (S)-(IV)

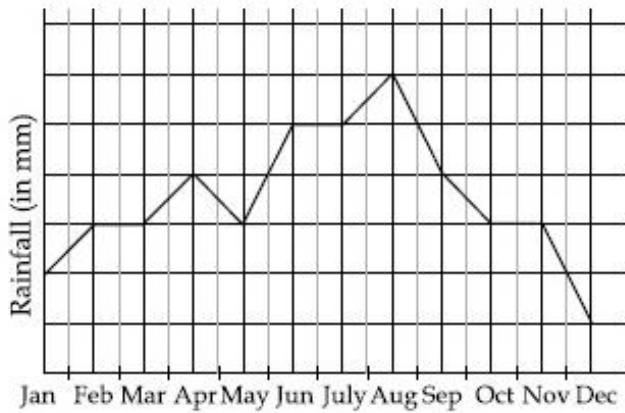
2. (P)-(IV), (Q)-(III), (R)-(I), (S)-(II)

3. (P)-(II), (Q)-(IV), (R)-(I), (S)-(III)

4. (P)-(III), (Q)-(I), (R)-(IV), (S)-(II)

Question Number : 92 Question Type : MCQ Option Shuffling : Yes

Correct Marks : 4 Wrong Marks : 1



The above graph depicts the average monthly rainfall for a particular year in the country XYZ. Select the incorrect option :

Options :

The driest months in the country are

1. December and January.

February-March have the same average rainfall as October-

2. November.

The country experiences the same average monthly rainfall in the months of May - June.

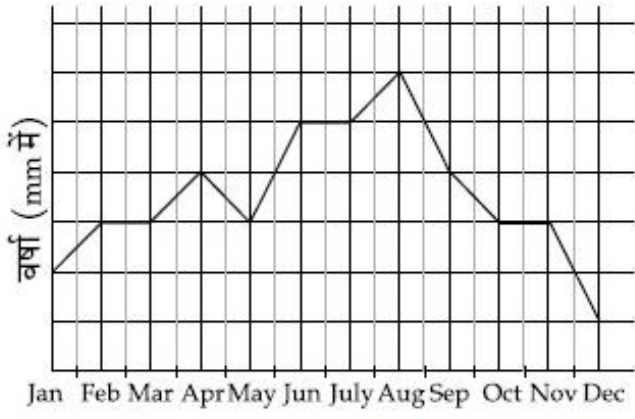
3.

The wettest spell experienced by the country is in the month of August.

4.

Question Number : 92 Question Type : MCQ Option Shuffling : Yes

Correct Marks : 4 Wrong Marks : 1

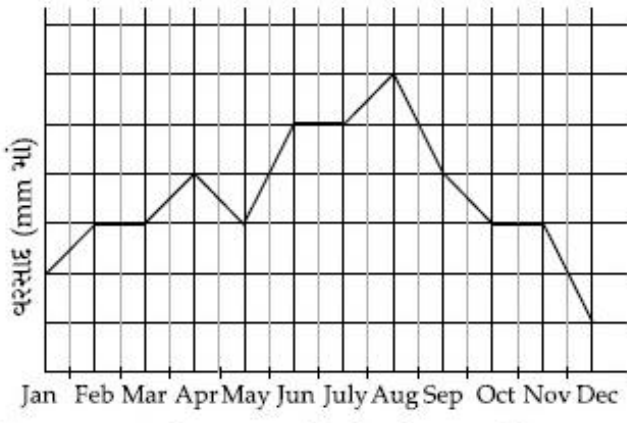


उपरोक्त लेखाचित्र XYZ देश में किसी वर्ष औसत मासिक वर्षा को दर्शाता है। गलत विकल्प चुनिए :

Options :

1. देश में सबसे सूखे महीने दिसम्बर तथा जनवरी हैं।
2. फरवरी-मार्च में औसत वर्षा उतनी ही है, जितनी अक्टुबर-नवम्बर में।
3. देश में मई-जून के महीनों में समान औसत मासिक वर्षा का अनुभव हुआ।
4. अगस्त के महीने में देश ने सबसे अधिक वर्षा का अनुभव किया।

Question Number : 92 Question Type : MCQ Option Shuffling : Yes  
Correct Marks : 4 Wrong Marks : 1



દેશ XYZ માં એક ખાસ વર્ષ માટે સરેરાશ માસિક વરસાદ ઉપરના આલેખમાં દર્શાવેલ છે. ખોટું વિધાન પસંદ કરો :

Options :

ડિસેમ્બર અને જાન્યુઆરી એ દેશમાં સૌથી શુષ્ક

1. મહિના છે.

ફેબ્રુઆરી-માર્ચનો સરેરાશ વરસાદ ઓક્ટોબર-

2. નવેમ્બર જેટલો છે.

મે-જૂન ના મહિનામાં દેશ સમાન સરેરાશ માસિક

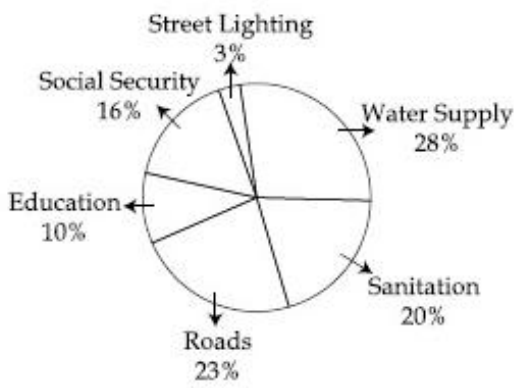
3. વરસાદનો અનુભવ કરે છે.

ઓગસ્ટના મહિનામાં દેશ વડે સૌથી વધારે વરસાદ

4. નો અનુભવ થયો.

Question Number : 93 Question Type : MCQ Option Shuffling : Yes

Correct Marks : 4 Wrong Marks : 1




The above graph shows a municipality's expenditure on different services for the financial year 2018-19. If the municipality spent a total of Rs. 50 crore during this period, the expenditure on 'Education' was :

Options :

1. Rs. 3 crores less than that spent on 'social security'.
2. Rs. 7 crores more than that spent on 'street lighting'
3. Rs. 1 crore
4. Rs. 0.5 crore

Question Number : 93 Question Type : MCQ Option Shuffling : Yes  
 Correct Marks : 4 Wrong Marks : 1



उपरोक्त लेखाचित्र वित्त वर्ष 2018-19 के लिए भिन्न सेवाओं पर एक नगर पालिका के खर्च को दिखाता है। यदि नगर पालिका ने इस अवधि में कुल रु. 50 करोड़ खर्च किए, तो 'शिक्षा' पर खर्च :

Options :

'सामाजिक सुरक्षा' पर खर्च से रु. 3 करोड़ कम

1. था।

'सड़कों की रोशनी' पर खर्च से रु. 7 करोड़


2. अधिक था।

3. रु. 1 करोड़

4. रु. 0.5 करोड़

Question Number : 93 Question Type : MCQ Option Shuffling : Yes

Correct Marks : 4 Wrong Marks : 1



નાણાકીય વર્ષ 2018 -19 માટે પાલિકાનો ખર્ચ જુદીજુદી સેવાઓ માટે ઉપરના આલેખમાં દર્શાવેલ છે. આ સમયગાળા દરમિયાન જો પાલિકા કુલ રૂપિયા 50 કરોડ નો ખર્ચ કરે તો શિક્ષણ ઉપર ખર્ચ શોધો.

Options :

‘સામાજિક સુરક્ષા’ ઉપર થતા ખર્ચ કરતાં રૂપિયા

1. 3 કરોડ ઓછો.

‘શેરી લાઇટીંગ’ ઉપર થતા ખર્ચ કરતા રૂપિયા 7

2. કરોડ વધુ.

3. રૂપિયા 1 કરોડ

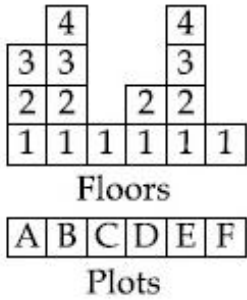
4. રૂપિયા 0.5 કરોડ

Question Number : 94 Question Type : MCQ Option Shuffling : Yes

Correct Marks : 4 Wrong Marks : 1



The figure shows floors as 1, 2, 3, 4 on each plot A, B, C, D, E, F. Plot A, D and E are commercial on all floors. B, C and F are residential on all floors. Find the percentage of total floors that are commercial and residential respectively :



Options :

1. 60% and 40%
2. 40% and 60%
3. 50% and 50%
4. 10% and 90%

Question Number : 94 Question Type : MCQ Option Shuffling : Yes

Correct Marks : 4 Wrong Marks : 1

रेखाचित्र प्रत्येक भूखण्ड A, B, C, D, E, F पर मंजिलों को 1, 2, 3, 4 द्वारा दर्शाता है। भूखण्ड A, D तथा E की सभी मंजिलें व्यवसायिक हैं। B, C तथा F की सभी मंजिलें आवासीय हैं। कुल मंजिलों का वह प्रतिशत ज्ञात कीजिए जो कि क्रमशः व्यवसायिक तथा आवासीय हैं :



Options :



1. 60% તથા 40%

2. 40% તથા 60%

3. 50% તથા 50%

4. 10% તથા 90%

Question Number : 94 Question Type : MCQ Option Shuffling : Yes  
Correct Marks : 4 Wrong Marks : 1

દરેક પ્લોટ A, B, C, D, E, F ઉપર માળ 1, 2, 3, 4  
આકૃતિમાં દર્શાવેલ છે. પ્લોટ A, D અને E ઉપર દરેક  
માળ વ્યાપારિક છે. પ્લોટ B, C અને F ઉપર દરેક માળ  
રહેણાંક છે. વ્યાપારિક અને રહેણાંકના બધા જ માળની  
ટકાવારી અનુક્રમે શોધો.

	4			4	
3	3			3	
2	2		2	2	
1	1	1	1	1	1
માળ					
A	B	C	D	E	F
પ્લોટ					

Options :

1. 60% અને 40%

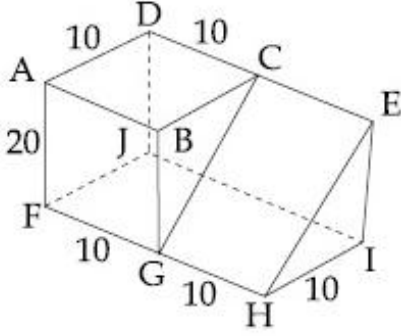
2. 40% અને 60%

3. 50% અને 50%

4. 10% અને 90%

Question Number : 95 Question Type : MCQ Option Shuffling : Yes  
Correct Marks : 4 Wrong Marks : 1

Calculate the surface area of the solid shown in the figure excluding the bottom surface :



Options :

1. 1000.36

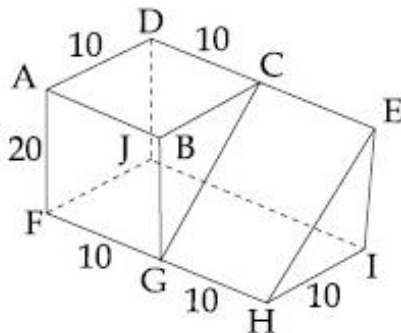
2. 1223.60

3. 1227.40

4. 1323.60

Question Number : 95 Question Type : MCQ Option Shuffling : Yes  
Correct Marks : 4 Wrong Marks : 1

निचले भाग के (bottom) के पृष्ठ को छोड़ते हुए  
रेखाचित्र में दिखाए ठोस का पृष्ठीय क्षेत्रफल निकालिए।



Options :

1. 1000.36

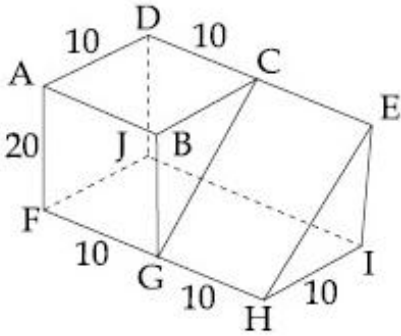
2. 1223.60

3. 1227.40

4. 1323.60

Question Number : 95 Question Type : MCQ Option Shuffling : Yes  
Correct Marks : 4 Wrong Marks : 1

આકૃતિમાં તળિયાની સપાટીને બાદ કરતા આકૃતિમાં  
બતાવેલ સપાટી વિસ્તાર ની ગણતરી કરો.



Options :

1. 1000.36

2. 1223.60

3. 1227.40

4. 1323.60

Question Number : 96 Question Type : MCQ Option Shuffling : Yes

Correct Marks : 4 Wrong Marks : 1

Following table gives the number of households and their corresponding monthly incomes. What will be the average monthly income of the household ?

Sl. No.	No. of Households	Monthly Household income (Rs)
1	300	20000
2	200	50000
3	150	100000
4	50	500000

Options :

1. 56000

2. 67000

3. 70000

4. 80000

Question Number : 96 Question Type : MCQ Option Shuffling : Yes

Correct Marks : 4 Wrong Marks : 1

निम्न सारणी में परिवारों की संख्या तथा उनकी संगत मासिक आय दी गई है। परिवारों की औसत मासिक आय क्या होगी ?

क्रम सं.	परिवारों की सं.	परिवार की मासिक आय (रु.)
1	300	20000
2	200	50000
3	150	100000
4	50	500000

Options :

1. 56000

2. 67000

3. 70000

4. 80000

Question Number : 96 Question Type : MCQ Option Shuffling : Yes

Correct Marks : 4 Wrong Marks : 1

નીચે કોષ્ટકમાં ઘરગથ્થુની સંખ્યા અને તેમની સાથે સંકળાયેલ માસિક આવક આપેલ છે. ઘરગથ્થુઓની સરેરાશ માસિક આવક શું હશે?

ક્રમ નંબર	ઘરગથ્થુઓની સંખ્યા	ઘરગથ્થુની માસિક આવક (રૂપિયા)
1	300	20000
2	200	50000
3	150	100000
4	50	500000

Options :

1. 56000

2. 67000

3. 70000

4. 80000

Question Number : 97 Question Type : MCQ Option Shuffling : Yes

Correct Marks : 4 Wrong Marks : 1

Read the given passage and answer the questions.

'Jatra' is a musical folk theatre art form, popular in Bengali speaking areas of the Indian sub-continent including Bangladesh, West Bengal, Orissa, Assam and Bihar. The word 'jatra' means journey. While the original themes of 'jatra' were largely religious, by the end of the 19<sup>th</sup> century, it began to include moral and later, even secular themes. The survival of this folk art form has been credited to its adaptability to changing social contexts.

Which of the following is indicated in the given paragraph ?

Options :

1. 'Jatra' refers to the journey of all folk-theatre forms in Bengal
2. 'Jatra' was performed originally in religious buildings only
3. 'Jatra' is popular in parts of India and Bangladesh
4. 'Jatra' came into existence in the 19<sup>th</sup> century

Question Number : 97 Question Type : MCQ Option Shuffling : Yes  
Correct Marks : 4 Wrong Marks : 1

Read the given passage and answer the questions.

'Jatra' is a musical folk theatre art form, popular in Bengali speaking areas of the Indian sub-continent including Bangladesh, West Bengal, Orissa, Assam and Bihar. The word 'jatra' means journey. While the original themes of 'jatra' were largely religious, by the end of the 19<sup>th</sup> century, it began to include moral and later, even secular themes. The survival of this folk art form has been credited to its adaptability to changing social contexts.

Which of the following is indicated in the given paragraph ?

Options :

1. 'Jatra' refers to the journey all folk-theatre forms in Bengal
2. 'Jatra' was performed originally in religious buildings only
3. 'Jatra' is popular in parts of India and Bangladesh
4. 'Jatra' came into existence in the 19<sup>th</sup> century

Question Number : 97 Question Type : MCQ Option Shuffling : Yes  
Correct Marks : 4 Wrong Marks : 1



Read the given passage and answer the questions.

'Jatra' is a musical folk theatre art form, popular in Bengali speaking areas of the Indian sub-continent including Bangladesh, West Bengal, Orissa, Assam and Bihar. The word 'jatra' means journey. While the original themes of 'jatra' were largely religious, by the end of the 19<sup>th</sup> century, it began to include moral and later, even secular themes. The survival of this folk art form has been credited to its adaptability to changing social contexts.

Which of the following is indicated in the given paragraph ?

Options :

1. 'Jatra' refers to the journey of all folk-theatre forms in Bengal
2. 'Jatra' was performed originally in religious buildings only
3. 'Jatra' is popular in parts of India and Bangladesh
4. 'Jatra' came into existence in the 19<sup>th</sup> century

Question Number : 98 Question Type : MCQ Option Shuffling : Yes  
Correct Marks : 4 Wrong Marks : 1



Read the given passage and answer the questions.

'Jatra' is a musical folk theatre art form, popular in Bengali speaking areas of the Indian sub-continent including Bangladesh, West Bengal, Orissa, Assam and Bihar. The word 'jatra' means journey. While the original themes of 'jatra' were largely religious, by the end of the 19<sup>th</sup> century, it began to include moral and later, even secular themes. The survival of this folk art form has been credited to its adaptability to changing social contexts.

The passage attributes the continued popularity of 'jatra' to.

Options :

1. the different social castes in Bengal
2. its flexibility in evolving its contents
3. its moral preachings
4. its beautiful folk music

Question Number : 98 Question Type : MCQ Option Shuffling : Yes

Correct Marks : 4 Wrong Marks : 1

Read the given passage and answer the questions.

'Jatra' is a musical folk theatre art form, popular in Bengali speaking areas of the Indian sub-continent including Bangladesh, West Bengal, Orissa, Assam and Bihar. The word 'jatra' means journey. While the original themes of 'jatra' were largely religious, by the end of the 19<sup>th</sup> century, it began to include moral and later, even secular themes. The survival of this folk art form has been credited to its adaptability to changing social contexts.

The passage attributes the continued popularity of 'jatra' to.

Options :

1. the different social castes in Bengal
2. its flexibility in evolving its contents
3. its moral preachings
4. its beautiful folk music

Question Number : 98 Question Type : MCQ Option Shuffling : Yes  
Correct Marks : 4 Wrong Marks : 1

Read the given passage and answer the questions.

'Jatra' is a musical folk theatre art form, popular in Bengali speaking areas of the Indian sub-continent including Bangladesh, West Bengal, Orissa, Assam and Bihar. The word 'jatra' means journey. While the original themes of 'jatra' were largely religious, by the end of the 19<sup>th</sup> century, it began to include moral and later, even secular themes. The survival of this folk art form has been credited to its adaptability to changing social contexts.

The passage attributes the continued popularity of 'jatra' to.

Options :

1. the different social castes in Bengal
2. its flexibility in evolving its contents
3. its moral preachings

4. its beautiful folk music

Question Number : 99 Question Type : MCQ Option Shuffling : Yes  
Correct Marks : 4 Wrong Marks : 1

**Statement I :**

Exposure to computer based learning is common in most schools today.

**Statement II :**

Most jobs require at least basic computer literacy.

Pick the correct option :

**Options :**

1. Statement I is the cause and statement II is its effect

2. Statement II is the cause and statement I is its effect

3. Statements I and II are independent effects

4. Statements I and II are causes of some common effect

Question Number : 99 Question Type : MCQ Option Shuffling : Yes  
Correct Marks : 4 Wrong Marks : 1

**कथन I :**

आजकल अधिकतर स्कूलों में कम्प्यूटर आधारित पढ़ाई का अनावरण (exposure) सामान्य है।

**कथन II :**

अधिकतर नौकरियों के लिए कम से कम आधारभूत कम्प्यूटर साक्षरता आवश्यक है।

सही विकल्प चुनिए :

**Options :**

1. કથન I કારણ છે તથા કથન II ઇસકા પરિણામ છે।
2. કથન II કારણ છે તથા કથન I ઇસકા પરિણામ છે।
3. કથન I તથા II સ્વતંત્ર પરિણામ છે।
4. કથન I તથા II કિસી સામાન્ય પરિણામ કે કારણ છે।

Question Number : 99 Question Type : MCQ Option Shuffling : Yes  
Correct Marks : 4 Wrong Marks : 1

વિધાન I :

આજના દિવસોમાં ઘણી શાળાઓમાં કમ્પ્યુટર આધારિત અભ્યાસનું અનાવરણ (exposure) સામાન્ય છે.

વિધાન II :

મોટા ભાગની નોકરીઓમાં ઓછામાં ઓછી મૂળભૂત કમ્પ્યુટર સાક્ષરતા જરૂરી છે.

Options :

વિધાન I એ કારણ છે અને વિધાન II એ તેની

1. અસર છે.

વિધાન II એ કારણ છે અને વિધાન I એ તેની

2. અસર છે.

3. વિધાનો I અને II સ્વતંત્ર અસરો છે.

4. છે.

Question Number : 100 Question Type : MCQ Option Shuffling : Yes  
Correct Marks : 4 Wrong Marks : 1

In a survey of tourists in a city, 120 tourists were women of which 35% stayed in the city for more than one day. Which of the following is the correct conclusion for this data ?

Options :

1. The majority of all tourists stay for less than a day.
2. Average stay of women tourists is approximately one day.
3. Approximately 35% of all tourists stay for more than one day.
4. Approximately 35% of women tourists stay for more than one day.

Question Number : 100 Question Type : MCQ Option Shuffling : Yes  
Correct Marks : 4 Wrong Marks : 1

एक शहर में पर्यटकों के एक सर्वेक्षण में, 120 पर्यटक महिलाएँ थीं जिनमें से 35% शहर में एक दिन से अधिक ठहरीं। इन आँकड़ों के लिए निम्न में से कौन सा निष्कर्ष सही है?

Options :

1. सभी पर्यटकों में अधिकांश एक दिन से कम ठहरते हैं।



2. महिला पर्यटकों का औसत ठहरना लगभग एक दिन है।

3. सभी पर्यटकों का लगभग 35% एक दिन से अधिक ठहरते हैं।

4. महिला पर्यटकों का लगभग 35% एक दिन से अधिक ठहरती है।

Question Number : 100 Question Type : MCQ Option Shuffling : Yes

Correct Marks : 4 Wrong Marks : 1

એક શહેરમાં પર્યટકોના એક સર્વેક્ષણમાં, 120 પ્રવાસી મહિલાઓ હતી કે જેમાંથી 35% શહેરમાં એક કરતા વધારે દિવસ રહેતી હતી. આ માહિતિ માટે નીચે આપેલામાંથી કયું સાચું તારણ છે?

Options :

1. મોટા ભાગના પ્રવાસીઓ એક દિવસ કરતા ઓછું રહે છે.

2. મહિલા પ્રવાસીઓનું સરેરાશ રોકાણ આશરે એક દિવસ છે.

3. બધા જ પ્રવાસીઓના આશરે 35% એક કરતા વધારે દિવસ માટે રોકાય છે.

4. મહિલા પ્રવાસીઓના આશરે 35% એક કરતા વધારે દિવસ માટે રોકાય છે.